

The University of the State of New York
REGENTS HIGH SCHOOL EXAMINATION

**PHYSICAL SETTING
CHEMISTRY**

Wednesday, January 27, 2016 — 9:15 a.m. to 12:15 p.m., only

The possession or use of any communications device is strictly prohibited when taking this examination. If you have or use any communications device, no matter how briefly, your examination will be invalidated and no score will be calculated for you.

This is a test of your knowledge of chemistry. Use that knowledge to answer all questions in this examination. Some questions may require the use of the *2011 Edition Reference Tables for Physical Setting/Chemistry*. You are to answer *all* questions in all parts of this examination according to the directions provided in this examination booklet.

A separate answer sheet for Part A and Part B–1 has been provided to you. Follow the instructions from the proctor for completing the student information on your answer sheet. Record your answers to the Part A and Part B–1 multiple-choice questions on this separate answer sheet. Record your answers for the questions in Part B–2 and Part C in your separate answer booklet. Be sure to fill in the heading on the front of your answer booklet.

All answers in your answer booklet should be written in pen, except for graphs and drawings, which should be done in pencil. You may use scrap paper to work out the answers to the questions, but be sure to record all your answers on your separate answer sheet or in your answer booklet as directed.

When you have completed the examination, you must sign the statement printed on your separate answer sheet, indicating that you had no unlawful knowledge of the questions or answers prior to the examination and that you have neither given nor received assistance in answering any of the questions during the examination. Your answer sheet and answer booklet cannot be accepted if you fail to sign this declaration.

Notice. . .

A four-function or scientific calculator and a copy of the *2011 Edition Reference Tables for Physical Setting/Chemistry* must be available for you to use while taking this examination.

DO NOT OPEN THIS EXAMINATION BOOKLET UNTIL THE SIGNAL IS GIVEN.

Part A

Answer all questions in this part.

Directions (1–30): For *each* statement or question, record on your separate answer sheet the *number* of the word or expression that, of those given, best completes the statement or answers the question. Some questions may require the use of the *2011 Edition Reference Tables for Physical Setting/Chemistry*.

- Which phrase describes the charge and mass of a neutron?
 - a charge of +1 and no mass
 - a charge of +1 and an approximate mass of 1 u
 - no charge and no mass
 - no charge and an approximate mass of 1 u
- What is the number of electrons in a potassium atom?
 - 18
 - 19
 - 20
 - 39
- The number of valence electrons in each atom of an element affects the element's
 - chemical properties
 - number of isotopes
 - decay mode
 - half-life
- The nuclides I-131 and I-133 are classified as
 - isomers of the same element
 - isomers of Xe-131 and Cs-133
 - isotopes of the same element
 - isotopes of Xe-131 and Cs-133
- The elements on the Periodic Table are arranged in order of increasing
 - mass number
 - atomic number
 - number of isotopes
 - number of valence electrons
- Compared to a 1.0-gram sample of chlorine gas at standard pressure, a 1.0-gram sample of solid aluminum at standard pressure has
 - a lower melting point
 - a higher boiling point
 - a lower density
 - a greater volume
- Which processes represent one chemical change and one physical change?
 - freezing and melting
 - freezing and vaporization
 - decomposition and melting
 - decomposition and combustion
- In the ground state, an atom of each of the elements in Group 2 has a different
 - oxidation state
 - first ionization energy
 - number of valence electrons
 - number of electrons in the first shell
- Which statement explains why water is classified as a compound?
 - Water can be broken down by chemical means.
 - Water is a liquid at room temperature.
 - Water has a heat of fusion of 334 J/g.
 - Water is a poor conductor of electricity.
- Which formula is an empirical formula?
 - CH₄
 - C₂H₆
 - C₃H₆
 - C₄H₁₀
- Which compound contains both ionic and covalent bonds?
 - KI
 - CaCl₂
 - CH₂Br₂
 - NaCN
- Given the balanced equation representing a reaction:
$$\text{H}_2 \rightarrow \text{H} + \text{H}$$
What occurs during this reaction?
 - Energy is absorbed as bonds are formed.
 - Energy is absorbed as bonds are broken.
 - Energy is released as bonds are formed.
 - Energy is released as bonds are broken.

- 13 Parts per million is used to express the
- (1) atomic mass of an element
 - (2) concentration of a solution
 - (3) volume of a substance
 - (4) rate of heat transfer
- 14 According to Table *F*, which ions combine with chloride ions to form an insoluble compound?
- (1) Fe^{2+} ions
 - (2) Ca^{2+} ions
 - (3) Li^+ ions
 - (4) Ag^+ ions
- 15 At 1 atm, equal masses of $\text{H}_2\text{O}(\text{s})$, $\text{H}_2\text{O}(\ell)$, and $\text{H}_2\text{O}(\text{g})$ have
- (1) the same density
 - (2) the same distance between molecules
 - (3) different volumes
 - (4) different percent compositions
- 16 Which list includes three forms of energy?
- (1) chemical, mechanical, electromagnetic
 - (2) chemical, mechanical, temperature
 - (3) thermal, pressure, electromagnetic
 - (4) thermal, pressure, temperature
- 17 At STP, a 1-liter sample of $\text{Ne}(\text{g})$ and a 1-liter sample of $\text{Kr}(\text{g})$ have the same
- (1) mass
 - (2) density
 - (3) number of atoms
 - (4) number of electrons
- 18 A reaction will most likely occur if the colliding particles have the proper
- (1) mass, only
 - (2) mass and volume
 - (3) orientation, only
 - (4) orientation and energy
- 19 Which factors have the greatest effect on the rate of a chemical reaction between $\text{AgNO}_3(\text{aq})$ and $\text{Cu}(\text{s})$?
- (1) solution concentration and temperature
 - (2) solution concentration and pressure
 - (3) molar mass and temperature
 - (4) molar mass and pressure
- 20 Which expression represents the heat of reaction for a chemical change in terms of potential energy, *PE*?
- (1) $(PE_{\text{products}}) + (PE_{\text{reactants}})$
 - (2) $(PE_{\text{products}}) - (PE_{\text{reactants}})$
 - (3) $(PE_{\text{products}}) \times (PE_{\text{reactants}})$
 - (4) $(PE_{\text{products}}) \div (PE_{\text{reactants}})$
- 21 When a chemical reaction is at equilibrium, the concentration of each reactant and the concentration of each product must be
- (1) constant
 - (2) variable
 - (3) equal
 - (4) zero
- 22 Which element is present in all organic compounds?
- (1) nitrogen
 - (2) oxygen
 - (3) carbon
 - (4) sulfur
- 23 Two types of organic reactions are
- (1) deposition and saponification
 - (2) deposition and transmutation
 - (3) polymerization and saponification
 - (4) polymerization and transmutation
- 24 Given the balanced equation representing a reaction:
- $$2\text{Al}(\text{s}) + 3\text{Cu}^{2+}(\text{aq}) \rightarrow 2\text{Al}^{3+}(\text{aq}) + 3\text{Cu}(\text{s})$$
- Which particles are transferred in this reaction?
- (1) electrons
 - (2) neutrons
 - (3) positrons
 - (4) protons
- 25 In an operating voltaic cell, reduction occurs
- (1) at the anode
 - (2) at the cathode
 - (3) in the salt bridge
 - (4) in the wire
- 26 Which type of substance yields hydrogen ions, H^+ , in an aqueous solution?
- (1) an Arrhenius acid
 - (2) an Arrhenius base
 - (3) a saturated hydrocarbon
 - (4) an unsaturated hydrocarbon

Part B-1

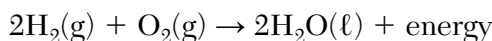
Answer all questions in this part.

Directions (31–50): For each statement or question, record on your separate answer sheet the number of the word or expression that, of those given, best completes the statement or answers the question. Some questions may require the use of the 2011 Edition Reference Tables for Physical Setting/Chemistry.

31 Which electron configuration represents an atom of chlorine in an excited state?

- (1) 2-7-7 (3) 2-8-7
(2) 2-7-8 (4) 2-8-8

32 Given the balanced equation representing a reaction occurring at 101.3 kilopascals and 298 K:



What is the net amount of energy released when one mole of $\text{H}_2\text{O}(\ell)$ is produced?

- (1) 241.8 kJ (3) 483.6 kJ
(2) 285.8 kJ (4) 571.6 kJ

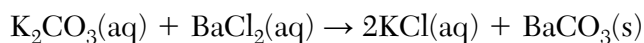
33 Element X reacts with copper to form the compounds CuX and CuX_2 . In which group on the Periodic Table is element X found?

- (1) Group 1 (3) Group 13
(2) Group 2 (4) Group 17

34 What is the mass of 1.5 moles of CO_2 ?

- (1) 66 g (3) 33 g
(2) 44 g (4) 29 g

35 Given the balanced equation representing a reaction:




Which type of reaction is represented by this equation?

- (1) synthesis
(2) decomposition
(3) single replacement
(4) double replacement

36 Which sample, when dissolved in 1.0 liter of water, produces a solution with the highest boiling point?

- (1) 0.1 mole KI (3) 0.1 mole MgCl_2
(2) 0.2 mole KI (4) 0.2 mole MgCl_2

37 Given the balanced equation representing a reaction:



What is the number of moles of $\text{H}_2\text{O}(\text{g})$ formed when 2.0 moles of $\text{NH}_3(\text{g})$ react completely?

- (1) 6.0 mol (3) 3.0 mol
(2) 2.0 mol (4) 4.0 mol

38 A rigid cylinder with a movable piston contains a sample of gas. At 300. K, this sample has a pressure of 240. kilopascals and a volume of 70.0 milliliters. What is the volume of this sample when the temperature is changed to 150. K and the pressure is changed to 160. kilopascals?

- (1) 35.0 mL (3) 70.0 mL
(2) 52.5 mL (4) 105 mL

39 A 100.-gram sample of $\text{H}_2\text{O}(\ell)$ at 22.0°C absorbs 8360 joules of heat. What will be the final temperature of the water?

- (1) 18.3°C (3) 25.7°C
(2) 20.0°C (4) 42.0°C

40 Which compound has the strongest hydrogen bonding at STP?

- (1) H_2O (3) H_2Se
(2) H_2S (4) H_2Te

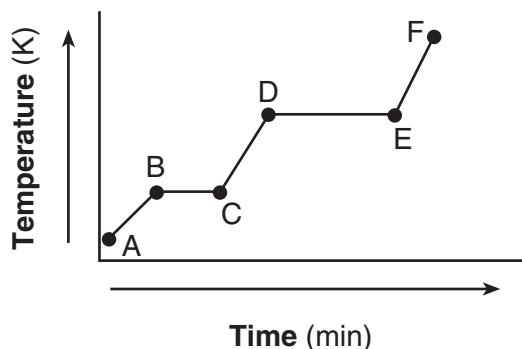
41 Which formula represents an unsaturated hydrocarbon?

- (1) C_2H_4 (3) C_4H_{10}
(2) C_3H_8 (4) C_5H_{12}

42 Which radioisotope is used in dating geological formations?

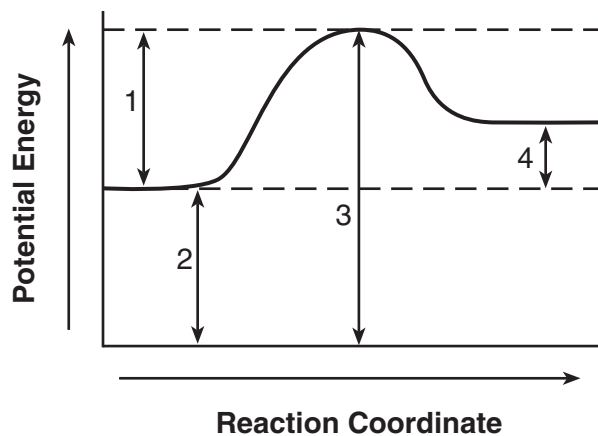
- (1) I-131 (3) Ca-37
(2) U-238 (4) Fr-220

- 43 The heating curve below represents a sample of a substance starting as a solid below its melting point and being heated over a period of time.



Which statement describes the energy of the particles in this sample during interval *DE*?

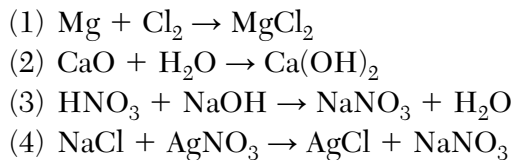
- (1) Both potential energy and average kinetic energy increase.
 - (2) Both potential energy and average kinetic energy decrease.
 - (3) Potential energy increases and average kinetic energy remains the same.
 - (4) Potential energy remains the same and average kinetic energy increases.
- 44 Given the potential energy diagram for a reaction:



Which intervals are affected by the addition of a catalyst?

- (1) 1 and 2
- (2) 1 and 3
- (3) 2 and 4
- (4) 3 and 4

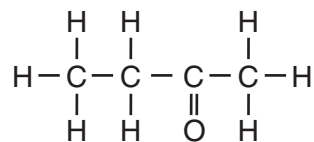
- 45 Which balanced equation represents a redox reaction?



- 46 The pH of a solution is 7. When acid is added to the solution, the hydronium ion concentration becomes 100 times greater. What is the pH of the new solution?

- (1) 1
- (2) 5
- (3) 9
- (4) 14

- 47 Given the formula for a compound:



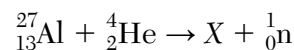
A chemical name for this compound is

- (1) butanal
- (2) butanol
- (3) butanone
- (4) butanoic acid

- 48 What occurs in both fusion and fission reactions?

- (1) Small amounts of energy are converted into large amounts of matter.
- (2) Small amounts of matter are converted into large amounts of energy.
- (3) Heavy nuclei are split into lighter nuclei.
- (4) Light nuclei are combined into heavier nuclei.

- 49 Given the reaction:



Which particle is represented by X?

- (1) ${}_{12}^{28}\text{Mg}$
- (2) ${}_{13}^{28}\text{Al}$
- (3) ${}_{14}^{30}\text{Si}$
- (4) ${}_{15}^{30}\text{P}$

- 50 A radioactive isotope has a half-life of 2.5 years. Which fraction of the original mass remains unchanged after 10. years?

- (1) 1/2
- (2) 1/4
- (3) 1/8
- (4) 1/16

Part B-2

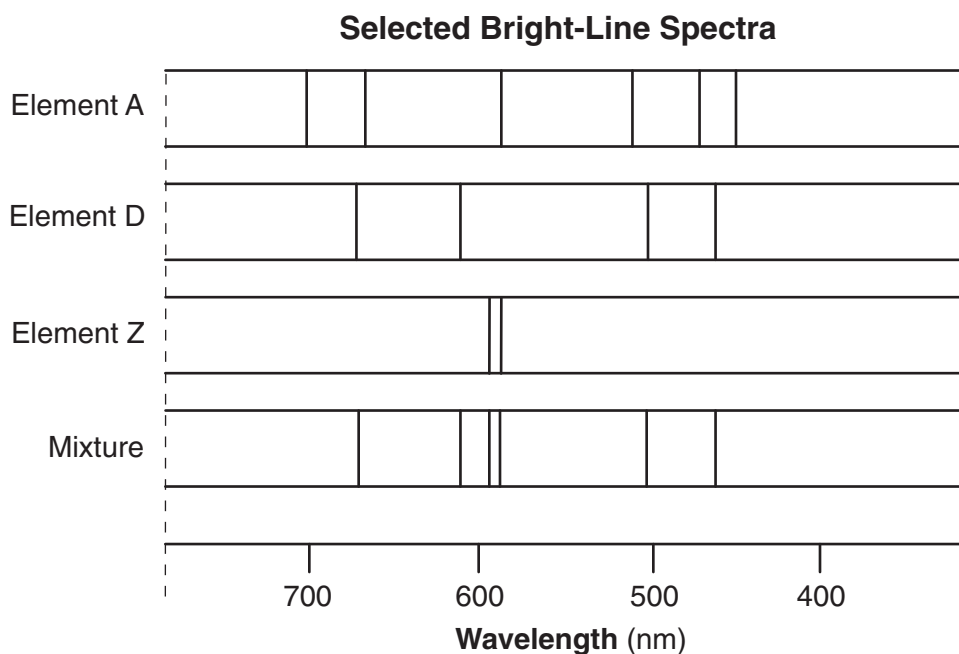
Answer all questions in this part.

Directions (51–65): Record your answers in the spaces provided in your answer booklet. Some questions may require the use of the *2011 Edition Reference Tables for Physical Setting/Chemistry*.

- 51 Based on Table *H*, state the vapor pressure of ethanol at 75°C. [1]
- 52 Show a numerical setup for calculating the percent composition by mass of silicon in SiO₂. [1]
- 53 Explain, in terms of element classification, why K₂O is an ionic compound. [1]

Base your answers to questions 54 through 56 on the information below and on your knowledge of chemistry.

The bright-line spectra observed in a spectroscope for three elements and a mixture of two of these elements are represented in the diagram below.



- 54 State evidence from the bright-line spectra that indicates element A is *not* present in the mixture. [1]
- 55 Explain why the spectrum produced by a 1-gram sample of element Z would have the same spectral lines at the same wavelengths as the spectrum produced by a 2-gram sample of element Z. [1]
- 56 Describe, in terms of *both* electrons and energy states, how the light represented by the spectral lines is produced. [1]

Base your answers to questions 57 through 61 on the information below and on your knowledge of chemistry.

The Lewis electron-dot diagrams for three substances are shown below.



Diagram 1

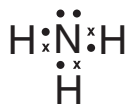


Diagram 2

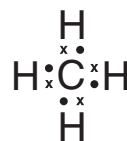


Diagram 3

- 57 Describe, in terms of valence electrons, how the chemical bonds form in the substance represented in diagram 1. [1]
- 58 Determine the total number of electrons in the bonds between the nitrogen atom and the three hydrogen atoms represented in diagram 2. [1]
- 59 Explain, in terms of distribution of charge, why a molecule of the substance represented in diagram 3 is nonpolar. [1]
- 60 Draw a Lewis electron-dot diagram for a molecule of Br_2 . [1]
- 61 Identify the noble gas that has atoms with the same electron configuration as the positive ion represented in diagram 1, when both the atoms and the ion are in the ground state. [1]
-

Base your answers to questions 62 through 65 on the information below and on your knowledge of chemistry.

A $\text{NaOH}(\text{aq})$ solution and an acid-base indicator are used to determine the molarity of an $\text{HCl}(\text{aq})$ solution. A 25.0-milliliter sample of the $\text{HCl}(\text{aq})$ is exactly neutralized by 15.0 milliliters of 0.20 M $\text{NaOH}(\text{aq})$.

- 62 Identify the laboratory process described in this passage. [1]
- 63 Complete the equation *in your answer booklet* for the neutralization reaction that occurs, by writing a formula for *each* product. [1]
- 64 Based on the data, the calculated molarity of the $\text{HCl}(\text{aq})$ solution should be expressed to what number of significant figures? [1]
- 65 Using the data, determine the concentration of the $\text{HCl}(\text{aq})$. [1]
-

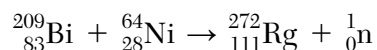
Part C

Answer all questions in this part.

Directions (66–85): Record your answers in the spaces provided in your answer booklet. Some questions may require the use of the *2011 Edition Reference Tables for Physical Setting/Chemistry*.

Base your answers to questions 66 through 68 on the information below and on your knowledge of chemistry.

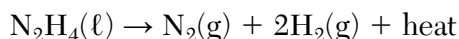
Elements with an atomic number greater than 92 can be artificially produced in nuclear reactions by bombarding a naturally occurring nuclide with a different nuclide. One of these elements is roentgenium, Rg. The equation below represents a nuclear reaction that produces Rg-272.



- 66 State the location and the total charge of the protons in a Ni-64 atom. [1]
- 67 Determine the number of neutrons in an atom of Rg-272. [1]
- 68 Based on the Periodic Table, classify the element produced by this nuclear reaction as a metal, metalloid, nonmetal, or noble gas. [1]
-

Base your answers to questions 69 through 72 on the information below and on your knowledge of chemistry.

Hydrazine, N_2H_4 , is a compound that is very soluble in water and has a boiling point of 113°C at standard pressure. Unlike water, hydrazine is very reactive and is sometimes used as a fuel for small rockets. One hydrazine reaction producing gaseous products is represented by the balanced equation below.



- 69 Compare the entropy of the products to the entropy of the reactant for this reaction. [1]
- 70 Based on Table S, determine the electronegativity difference for the N-H bond in hydrazine. [1]
- 71 Explain, in terms of molecular polarity, why N_2H_4 is very soluble in water. [1]
- 72 Explain, in terms of intermolecular forces, why the boiling point of hydrazine at standard pressure is higher than the boiling point of water at standard pressure. [1]
-

Base your answers to questions 73 through 75 on the information below and on your knowledge of chemistry.

A laboratory technician is given the table below and a sample of one of the three substances listed in the table. The technician makes an aqueous solution with a portion of the sample. When a conductivity tester is lowered into the solution, the lightbulb on the tester glows brightly. Another portion of the sample is placed in a heat-resistant container that is placed in an oven at 450.°C. The sample melts.

Some Properties of Three Substances

Property	Substance		
	Sodium nitrate	Potassium chromate	Sulfur
solubility in water at 20.°C	soluble	soluble	insoluble
electrical conductivity of aqueous solution	good	good	not applicable
melting point (°C)	307	974	115

- 73 Identify the substance given to the technician. [1]
- 74 State evidence that makes it necessary to use more than one property to identify the substance given to the technician. [1]
- 75 Explain, in terms of ions, why an aqueous solution of potassium chromate conducts an electric current. [1]
-

Base your answers to questions 76 through 78 on the information below and on your knowledge of chemistry.

Natural gas and coal are two fuels burned to produce energy. Natural gas consists of approximately 80% methane, 10% ethane, 4% propane, 2% butane, and other components.

The burning of coal usually produces sulfur dioxide, $\text{SO}_2(\text{g})$, and sulfur trioxide, $\text{SO}_3(\text{g})$, which are major air pollutants. Both $\text{SO}_2(\text{g})$ and $\text{SO}_3(\text{g})$ react with water in the air to form acids.

- 76 Write the general formula for the homologous series that includes the components of the natural gas listed in this passage. [1]
- 77 Draw a structural formula for the hydrocarbon that is approximately 2% of natural gas. [1]
- 78 Complete the equation *in your answer booklet* representing the reaction of sulfur trioxide with water to produce sulfuric acid, by writing the formula of the missing reactant and the formula of the missing product. [1]
-

Base your answers to questions 79 through 82 on the information below and on your knowledge of chemistry.

A student prepares two 141-gram mixtures, *A* and *B*. Each mixture consists of NH_4Cl , sand, and H_2O at 15°C . Both mixtures are thoroughly stirred and allowed to stand. The mass of each component used to make the mixtures is listed in the data table below.

Mass of the Components in Each Mixture

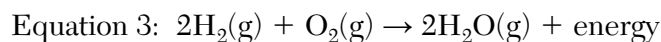
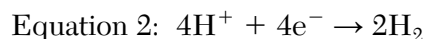
Component	Mixture A (g)	Mixture B (g)
NH_4Cl	40.	10.
sand	1	31
H_2O	100.	100.

- 79 State evidence from the table indicating that the proportion of the components in a mixture can vary. [1]
- 80 Which type of mixture is mixture *B*? [1]
- 81 Determine the temperature at which all of the NH_4Cl in mixture *A* dissolves to form a saturated solution. [1]
- 82 Describe *one* property of sand that would enable the student to separate the sand from the other components in mixture *B*. [1]
-

Base your answers to questions 83 through 85 on the information below and on your knowledge of chemistry.

Fossil fuels produce air pollution and may eventually be depleted. Scientists are researching ways to use hydrogen as an alternate fuel.

A device called an artificial leaf was invented to produce hydrogen and oxygen using sunlight and water. The artificial leaf is an electrochemical cell. Equations 1 and 2 below represent the reactions taking place in the leaf. Equation 3 represents a reaction of hydrogen when used as fuel.



- 83 State *one* benefit of using the artificial leaf to produce hydrogen. [1]
- 84 Explain, in terms of energy, why the artificial leaf is an electrolytic cell. [1]
- 85 State the change in oxidation number of oxygen during the reaction represented in equation 3. [1]
-

