



---

***New York State  
Testing Program***

---

**2024**

**Mathematics Test**

**Grade 4**

**Scoring Leader Materials**

**Training Set**



### 1-Credit Constructed-Response Rubric

<b>1 Credit</b>	A 1-credit response is a <b>correct answer</b> to the question which indicates a thorough understanding of mathematical concepts and/or procedures.
<b>0 Credits*</b>	A 0-credit response is incorrect, irrelevant, or incoherent.

\* Condition Code A is applied whenever a student who is present for a test session leaves an entire constructed-response question in that session completely blank (no response attempted).

### 2-Credit Constructed-Response Holistic Rubric

<b>2 Credits</b>	<p>A 2-credit response includes the correct solution to the question and demonstrates a thorough understanding of the mathematical concepts and/or procedures in the task.</p> <p>This response</p> <ul style="list-style-type: none"><li>• indicates that the student has completed the task correctly, using mathematically sound procedures</li><li>• contains sufficient work to demonstrate a thorough understanding of the mathematical concepts and/or procedures</li><li>• may contain inconsequential errors that do not detract from the correct solution and the demonstration of a thorough understanding</li></ul>
<b>1 Credit</b>	<p>A 1-credit response demonstrates only a partial understanding of the mathematical concepts and/or procedures in the task.</p> <p>This response</p> <ul style="list-style-type: none"><li>• correctly addresses only some elements of the task</li><li>• may contain an incorrect solution but applies a mathematically appropriate process</li><li>• may contain the correct solution but required work is incomplete</li></ul>
<b>0 Credits*</b>	A 0-credit response is incorrect, irrelevant, incoherent, or contains a correct solution obtained using an obviously incorrect procedure. Although some elements may contain correct mathematical procedures, holistically they are not sufficient to demonstrate even a limited understanding of the mathematical concepts embodied in the task.

\* Condition Code A is applied whenever a student who is present for a test session leaves an entire constructed-response question in that session completely blank (no response attempted).

### 3-Credit Constructed-Response Holistic Rubric

<b>3 Credits</b>	<p>A 3-credit response includes the correct solution(s) to the question and demonstrates a thorough understanding of the mathematical concepts and/or procedures in the task.</p> <p>This response</p> <ul style="list-style-type: none"> <li>• indicates that the student has completed the task correctly, using mathematically sound procedures</li> <li>• contains sufficient work to demonstrate a thorough understanding of the mathematical concepts and/or procedures</li> <li>• may contain inconsequential errors that do not detract from the correct solution(s) and the demonstration of a thorough understanding</li> </ul>
<b>2 Credits</b>	<p>A 2-credit response demonstrates a partial understanding of the mathematical concepts and/or procedures in the task.</p> <p>This response</p> <ul style="list-style-type: none"> <li>• appropriately addresses most but not all aspects of the task using mathematically sound procedures</li> <li>• may contain an incorrect solution but provides sound procedures, reasoning, and/or explanations</li> <li>• may reflect some minor misunderstanding of the underlying mathematical concepts and/or procedures</li> </ul>
<b>1 Credit</b>	<p>A 1-credit response demonstrates only a limited understanding of the mathematical concepts and/or procedures in the task.</p> <p>This response</p> <ul style="list-style-type: none"> <li>• may address some elements of the task correctly but reaches an inadequate solution and/or provides reasoning that is faulty or incomplete</li> <li>• exhibits multiple flaws related to misunderstanding of important aspects of the task, misuse of mathematical procedures, or faulty mathematical reasoning</li> <li>• reflects a lack of essential understanding of the underlying mathematical concepts</li> <li>• may contain the correct solution(s) but required work is limited</li> </ul>
<b>0 Credits*</b>	<p>A 0-credit response is incorrect, irrelevant, incoherent, or contains a correct solution obtained using an obviously incorrect procedure. Although some elements may contain correct mathematical procedures, holistically they are not sufficient to demonstrate even a limited understanding of the mathematical concepts embodied in the task.</p>

\* Condition Code A is applied whenever a student who is present for a test session leaves an entire constructed-response question in that session completely blank (no response attempted).



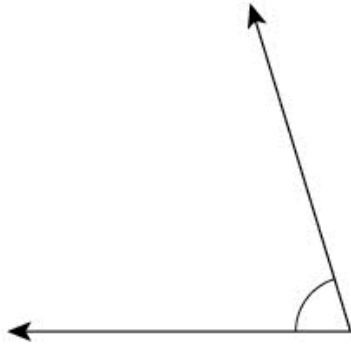
### **1-Credit Constructed-Response Mathematics Scoring Policies (2024)**

1. The student is **not** required to show work for a 1-credit constructed-response question, therefore, any work shown will **not** be scored. A clearly identified correct response should still receive full credit.
2. If the student clearly identifies a correct answer but fails to write that answer in the answer space, the student should still receive full credit.
3. If the student provides one legible response (and one response only), the rater should score the response, even if it has been crossed out.
4. If the student has written more than one response but has crossed some out, the rater should score only the response that has **not** been crossed out.
5. If the student provides more than one response but does not indicate which response is to be considered the correct response and none have been crossed out, the student shall not receive credit.
6. If the student does not provide the answer in the form as directed in the question, the student will not receive credit.
7. In questions requiring number sentences, the number sentences must be written horizontally.
8. When measuring angles with a protractor, there is a +/- 5 degrees deviation allowed of the true measure.
9. Condition Code A is applied whenever a student who is present for a test session leaves an entire constructed-response question in that session completely blank (no response attempted). This is not to be confused with a score of zero wherein the student does respond to part or all of the question, but that work results in a score of zero.

## 2- and 3-Credit Constructed-Response Mathematics Scoring Policies (2024)

1. If a student shows the work in other than a designated “Show your work” or “Explain” area, that work should still be scored.
2. If the question requires students to show their work, and the student shows appropriate work and clearly identifies a correct answer but fails to write that answer in the answer space, the student should still receive full credit.
3. If students are directed to show work or provide an explanation, a correct answer with **no** work shown or **no** explanation provided, receives **no** credit.
4. If students are **not** directed to show work, any work shown will **not** be scored. This applies to questions that do **not** ask for any work and questions that ask for work for one part and do **not** ask for work in another part.
5. If the student provides one legible response (and one response only), the rater should score the response, even if it has been crossed out.
6. If the student has written more than one response but has crossed some out, the rater should score only the response that has **not** been crossed out.
7. If the student provides more than one response, but does not indicate which response is to be considered the correct response and none have been crossed out, the student shall not receive full credit.
8. Trial-and-error responses are **not** subject to Scoring Policy #6 above, since crossing out is part of the trial-and-error process.
9. If a response shows repeated occurrences of the same conceptual error within a question, the conceptual error should **not** be considered more than once in gauging the demonstrated level of understanding.
10. In questions requiring number sentences, the number sentences must be written horizontally.
11. When measuring angles with a protractor, there is a +/- 5 degrees deviation allowed of the true measure.
12. Condition Code A is applied whenever a student who is present for a test session leaves an entire constructed-response question in that session completely blank (no response attempted). This is not to be confused with a score of zero wherein the student does respond to part or all of the question but that work results in a score of zero.

What is the measure, in degrees, of the angle shown below?

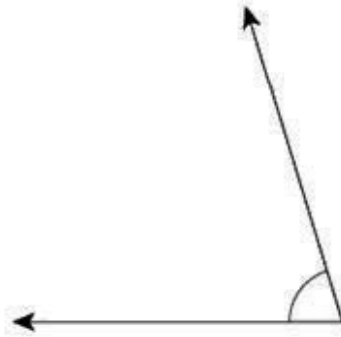


*Answer* \_\_\_\_\_ degrees

# EXEMPLARY RESPONSE

36

What is the measure, in degrees, of the angle shown below?



*Answer*

**73**

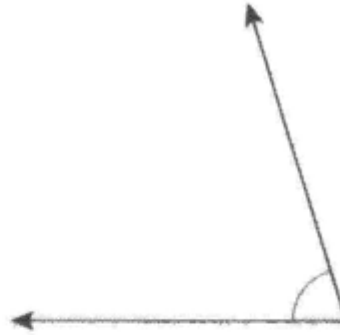
*degrees*

*OR an answer within 5 degrees of 73*

# GUIDE PAPER 1

36

What is the measure, in degrees, of the angle shown below? [1]



Answer 73 degrees

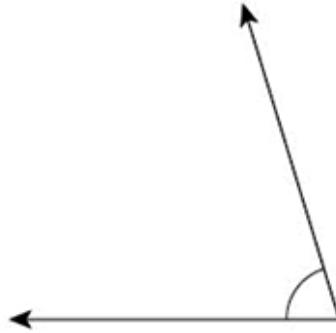
**Score Credit 1 (out of 1 credit)**

A correct answer is provided.

## GUIDE PAPER 2

36

What is the measure, in degrees, of the angle shown below?



Answer  degrees

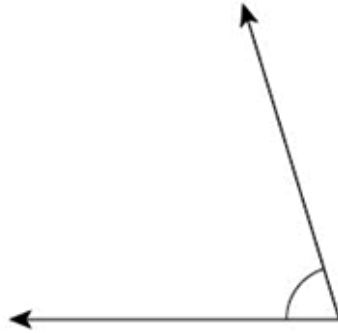
**Score Credit 1 (out of 1 credit)**

A correct answer is provided.

# GUIDE PAPER 3

36

What is the measure, in degrees, of the angle shown below?



Answer  degrees

**Score Credit 0 (out of 1 credit)**

An incorrect answer is provided.

List all the factors of 21.

*Answer* \_\_\_\_\_



# EXEMPLARY RESPONSE

37

List all the factors of 21.

*Answer* 1, 3, 7, 21

# GUIDE PAPER 1

37

List all the factors of 21.

*Answer*

**Score Credit 1 (out of 1 credit)**

A correct answer is provided.

## GUIDE PAPER 2

37

List all the factors of 21. [1]

7, 3, 21, 1

Answer 7, 3, 21, 1

**Score Credit 1 (out of 1 credit)**

A correct answer is provided.

# GUIDE PAPER 3

37

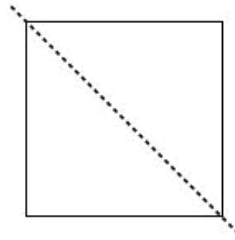
List all the factors of 21.

Answer

**Score Credit 0 (out of 1 credit)**

An incorrect answer is provided.

A square is divided into two equal triangles as shown below.



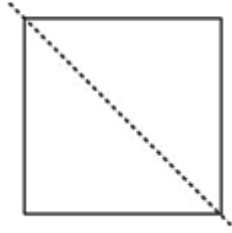
What type of triangles are created when the square is divided into the two equal triangles?

*Answer* \_\_\_\_\_ triangles

# EXEMPLARY RESPONSE

38

A square is divided into two equal triangles as shown below.



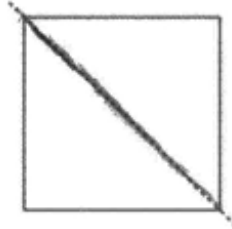
What type of triangles are created when the square is divided into the two equal triangles?

**right**  
**OR**  
**Answer** **isosceles** triangles

# GUIDE PAPER 1

38

A square is divided into two equal triangles as shown below.



What type of triangles are created when the square is divided into the two equal triangles? [1]

Answer right triangles

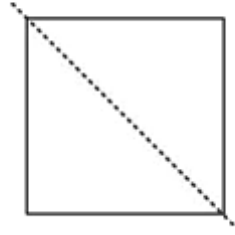
**Score Credit 1 (out of 1 credit)**

A correct answer is provided.

## GUIDE PAPER 2

38

A square is divided into two equal triangles as shown below.



What type of triangles are created when the square is divided into the two equal triangles?

*Answer*

icosilies

triangles

**Score Credit 1 (out of 1 credit)**

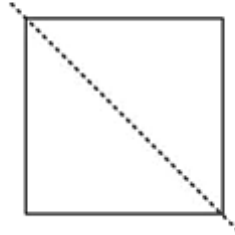
A correct answer is provided.



## GUIDE PAPER 3

38

A square is divided into two equal triangles as shown below.



What type of triangles are created when the square is divided into the two equal triangles?

Answer  triangles

**Score Credit 0 (out of 1 credit)**

An incorrect answer is provided.

A soccer team sold water bottles to earn money to buy new soccer balls. The team earned a total of \$170. If the team pays \$9 per soccer ball, what is the greatest number of soccer balls they can buy with the money earned?

*Explain your answer.*

---

---

---

## EXEMPLARY RESPONSE

39

A soccer team sold water bottles to earn money to buy new soccer balls. The team earned a total of \$170. If the team pays \$9 per soccer ball, what is the greatest number of soccer balls they can buy with the money earned?

*Explain your answer.*

**18**

**I divided \$170 by \$9 and I got 18 and a remainder of 8.**

**So, they can buy 18 soccer balls and are left with \$8.**

**Since each ball costs \$9, it is not possible to buy another ball with only \$8. They can only buy 18 balls.**

*OR other valid explanation*

A soccer team sold water bottles to earn money to buy new soccer balls. The team earned a total of \$170. If the team pays \$9 per soccer ball, what is the greatest number of soccer balls they can buy with the money earned?

Explain your answer.

The total number of soccer balls they can buy is 18. They can only buy 18 because they don't have enough to buy 19, and they only have enough money for 18.



$$\begin{array}{r}
 18 \\
 9 \overline{)170} \\
 \underline{-90} \phantom{0} \\
 80 \\
 \underline{-72} \\
 8
 \end{array}
 \qquad
 \begin{array}{r}
 18 \\
 \times 9 \\
 \hline
 162 \\
 \phantom{1}8 \\
 \hline
 170
 \end{array}$$

**Score Credit 2 (out of 2 credits)**

This response demonstrates a thorough understanding of the mathematical concepts and procedures in the task. The money earned is divided by the cost per soccer ball and the remainder is correctly interpreted. The explanation that “they don't have enough to buy 19, and they only have enough money for 18” demonstrates a thorough understanding. All work is shown, and a correct answer is provided. This response is complete and correct.

## GUIDE PAPER 2

39

A soccer team sold water bottles to earn money to buy new soccer balls. The team earned a total of \$170. If the team pays \$9 per soccer ball, what is the greatest number of soccer balls they can buy with the money earned?

*Explain your answer.*

$$170 \div 9 = 18 \text{ r}8 \text{ } 9 > 8$$

They could buy 18 soccer balls

### Score Credit 2 (out of 2 credits)

This response demonstrates a thorough understanding of the mathematical concepts and procedures in the task. The money earned is divided by the cost per soccer ball and the remainder is correctly interpreted with the explanation that 9 is greater than 8. Sufficient work is shown, and the correct answer is provided. This response is complete and correct.

## GUIDE PAPER 3

39

A soccer team sold water bottles to earn money to buy new soccer balls. The team earned a total of \$170. If the team pays \$9 per soccer ball, what is the greatest number of soccer balls they can buy with the money earned?

*Explain your answer.*

I divided 9 into 170 my answer was 18 R8. Therefore the greatest number of soccer balls they could afford was 18.

### Score Credit 2 (out of 2 credits)

This response demonstrates a thorough understanding of the mathematical concepts and procedures in the task. The money earned is divided by the cost per soccer ball and the remainder is correctly interpreted. The explanation is sufficient to demonstrate a thorough understanding and the correct answer is provided. This response is complete and correct.

## GUIDE PAPER 4

39

A soccer team sold water bottles to earn money to buy new soccer balls. The team earned a total of \$170. If the team pays \$9 per soccer ball, what is the greatest number of soccer balls they can buy with the money earned?

*Explain your answer.*

$$170 \div 9 = 17 \text{ remainder } 7$$

the team can buy 17 soccer balls with 170 dollars

### Score Credit 1 (out of 2 credits)

This response demonstrates only a partial understanding of the mathematical concepts and procedures in the task. The money earned is divided by the cost per soccer ball. A calculation error occurs when computing 170 divided by 9, resulting in an incorrect answer of 17; however, the remainder is correctly interpreted. This response correctly addresses only some elements of the task.

## GUIDE PAPER 5

39

A soccer team sold water bottles to earn money to buy new soccer balls. The team earned a total of \$170. If the team pays \$9 per soccer ball, what is the greatest number of soccer balls they can buy with the money earned?

*Explain your answer.*

$$\$170 \div \$9 = 18 \text{ soccer balls}$$

### Score Credit 1 (out of 2 credits)

This response demonstrates only a partial understanding of the mathematical concepts and procedures in the task. The money earned is divided by the cost per soccer ball, but an incorrect equation that does not address the remainder is written. This response contains the correct solution, but the required explanation is incomplete. This response correctly addresses only some elements of the task.



## GUIDE PAPER 6

39

A soccer team sold water bottles to earn money to buy new soccer balls. The team earned a total of \$170. If the team pays \$9 per soccer ball, what is the greatest number of soccer balls they can buy with the money earned?

*Explain your answer.*

I did  $9 \div 170$  and got 18 r8 but the remainder is not a 9 so they could not buy a nother soccer ball so the soccer team could buy 18 soccer balls

### Score Credit 1 (out of 2 credits)

This response demonstrates only a partial understanding of the mathematical concepts and procedures in the task. Although a correct answer of 18 is provided, the division is inversely written as 9 divided by 170. The explanation that “the remainder is not a 9 so they could not buy a nother soccer ball” is sufficient to interpret the remainder. This response correctly addresses only some elements of the task.

## GUIDE PAPER 7

39

A soccer team sold water bottles to earn money to buy new soccer balls. The team earned a total of \$170. If the team pays \$9 per soccer ball, what is the greatest number of soccer balls they can buy with the money earned?

*Explain your answer.*

108 117 126 135 144 153 162 171 so i counted by nines all the way to 171 they would have 8 soccer balls

### Score Credit 0 (out of 2 credits)

This response is not sufficient to demonstrate even a limited understanding of the mathematical concepts in the task. Although the procedure of counting by nines could be a valid method of solution, this response fails to reference when the counting exceeds 170, and also does not mention the first eleven soccer balls (groups of 9) counted. The answer of 8 soccer balls is incorrectly given. Holistically, this response shows no overall understanding of the task.

39

A soccer team sold water bottles to earn money to buy new soccer balls. The team earned a total of \$170. If the team pays \$9 per soccer ball, what is the greatest number of soccer balls they can buy with the money earned?

*Explain your answer.*

$$9 \div 170 = 18$$

**Score Credit 0 (out of 2 credits)**

This response is not sufficient to demonstrate even a limited understanding of the mathematical concepts in the task. Although the correct answer of 18 is provided, it is arrived at by incorrect procedure (9 is divided by 170) and the remainder is not addressed. Holistically, this response shows no overall understanding of the task.

Two numbers are shown below.

4,699 and 4,780

Write the two numbers in expanded form, and then compare them using the  $>$ ,  $<$ , or  $=$  symbol. Be sure to include what you know about place value in your answer.

*Explain how you know your answer is correct.*

---

---

---

# EXEMPLARY RESPONSE

40

Two numbers are shown below.

4,699 and 4,780

Write the two numbers in expanded form, and then compare them using the  $>$ ,  $<$ , or  $=$  symbol. Be sure to include what you know about place value in your answer.

*Explain how you know your answer is correct.*

$$4,000 + 600 + 90 + 9 < 4,000 + 700 + 80 + 0$$

*OR*

$$4,000 + 700 + 80 + 0 > 4,000 + 600 + 90 + 9$$

*OR*

$$4,000 + 600 + 90 + 9$$

$$4,000 + 700 + 80 + 0$$

$$4,699 < 4,780$$

*AND*

**I know my answer is correct because the number in the thousands place is the same in both numbers, but 700 is greater than 600.**

*OR other valid explanation*

Two numbers are shown below.

4,699 and 4,780

Write the two numbers in expanded form, and then compare them using the  $>$ ,  $<$ , or  $=$  symbol. Be sure to include what you know about place value in your answer.

*Explain how you know your answer is correct.*

$$4,000 + 600 + 90 + 9 < 4,000 + 700 + 80 + 0$$

I know my answer is correct because  $4,000 = 4,000$  but  $600 < 700$ .

### Score Credit 2 (out of 2 credits)

This response demonstrates a thorough understanding of the mathematical concepts and procedures in the task. Expanded forms are correctly written and correctly compared. The explanation that “ $4,000 = 4,000$  but  $600 < 700$ ” is sufficient to demonstrate a thorough understanding. This response is complete and correct.

## GUIDE PAPER 2

40

Two numbers are shown below.

4,699 and 4,780

Write the two numbers in expanded form, and then compare them using the  $>$ ,  $<$ , or  $=$  symbol. Be sure to include what you know about place value in your answer. [2]

*Explain how you know your answer is correct.*

I compared both and the answer is  
4,780  $>$  4,699

$$\begin{array}{l} 4,699 = 4,000 + 600 + 90 + 9 \\ 4,780 = 4,000 + 700 + 80 + 0 \end{array}$$

$$4,780 > 4,699$$

$$4,699 + 81 = 4,780$$

$$\begin{array}{r} 4,780 \\ - 4,699 \\ \hline 81 \end{array}$$

### Score Credit 2 (out of 2 credits)

This response demonstrates a thorough understanding of the mathematical concepts and procedures in the task. Expanded forms are correctly written and compared, and a correct explanation is written. The incorrect equation  $4,699 + 81 = 4,780$  stated in work is considered inconsequential and does not detract from the demonstration of understanding. This response is complete and correct.

## GUIDE PAPER 3

40

Two numbers are shown below.

4,699 and 4,780

Write the two numbers in expanded form, and then compare them using the  $>$ ,  $<$ , or  $=$  symbol. Be sure to include what you know about place value in your answer.

*Explain how you know your answer is correct.*

4,000+600+90+9

second one 4,000+700+80

4,699 < 4,780

I know my answer is correct because if you look in the hundreds place 4,699 has 600 and 4,780 has 700 and 700 is larger than 600

### Score Credit 2 (out of 2 credits)

This response demonstrates a thorough understanding of the mathematical concepts and procedures in the task. The number 4,699 is identified as less than 4,780. Even though the explanation for the comparison does not begin with mentioning that the thousands digits are the same, the explanation does state to “look in the hundreds place...and 700 is larger than 600” and is sufficient to demonstrate a thorough understanding. This response is complete and correct.



## GUIDE PAPER 4

40

Two numbers are shown below.

4,699 and 4,780

Write the two numbers in expanded form, and then compare them using the  $>$ ,  $<$ , or  $=$  symbol. Be sure to include what you know about place value in your answer. [2]

*Explain how you know your answer is correct.*

Four thousand six hundred ninety-nine and Four thousand  
Seven hundred eighty.  $4,699 < 4,780$ . The hundreds  
place in  $4,780$  is greater than the hundreds place  
in  $4,699$ .

### Score Credit 1 (out of 2 credits)

This response demonstrates only a partial understanding of the mathematical concepts and procedures in the task. The explanation that “the hundreds place in 4,780 is greater than the hundreds place in 4,699” is valid. The number 4,699 is identified as less than 4,780; however, the numbers are not written in expanded form. This response correctly addresses only some elements of the task.

## GUIDE PAPER 5

40

Two numbers are shown below.

4,699 and 4,780

Write the two numbers in expanded form, and then compare them using the  $>$ ,  $<$ , or  $=$  symbol. Be sure to include what you know about place value in your answer.

*Explain how you know your answer is correct.*

4,000+600+90+9  $<$  4,000+700+10+8 I know my answer is correct because looking at my answer you can see that both of the numbers begin with 4,000 but not both have the same number in the hundredths place. Seeing that 700 is a larger number than 600 4,780 is greater than 4,699.

### Score Credit 1 (out of 2 credits)

This response demonstrates only a partial understanding of the mathematical concepts and procedures in the task. The explanation involves the comparison of the thousands and hundreds place values, and is valid. The provided expanded forms are correctly compared; however,  $4,000 + 700 + 10 + 8$  is incorrect. This response correctly addresses only some elements of the task.

# GUIDE PAPER 6

40

Two numbers are shown below.

4,699 and 4,780

Write the two numbers in expanded form, and then compare them using the  $>$ ,  $<$ , or  $=$  symbol. Be sure to include what you know about place value in your answer. [2]

*Explain how you know your answer is correct.*

$4000 + 700 + 90 + 9 > 4000 + 600 + 90 + 9$  because  
the hundred is bigger

4.

## Score Credit 1 (out of 2 credits)

This response demonstrates only a partial understanding of the mathematical concepts and procedures in the task. The comparison is incorrect and incomplete reasoning is provided. This response correctly addresses only some elements of the task.

# GUIDE PAPER 7

40

Two numbers are shown below.

4,699 and 4,780

Write the two numbers in expanded form, and then compare them using the  $>$ ,  $<$ , or  $=$  symbol. Be sure to include what you know about place value in your answer. [2]

*Explain how you know your answer is correct.*

4,780 is the bigger number

---

---

4,699  $<$  4,780

**Score Credit 0 (out of 2 credits)**

This response is not sufficient to demonstrate even a limited understanding of the mathematical concepts in the task. Expanded forms are not written and no explanation for the comparison is given. Holistically, this response shows no overall understanding of the task.

40

Two numbers are shown below.

4,699 and 4,780

Write the two numbers in expanded form, and then compare them using the  $>$ ,  $<$ , or  $=$  symbol. Be sure to include what you know about place value in your answer.

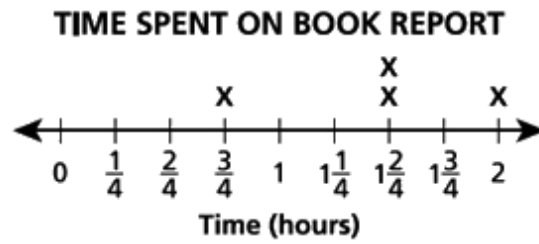
*Explain how you know your answer is correct.*

4,000 600 90 9  $>$  4,000 700 80 In place value you write  
number differnt

**Score Credit 0 (out of 2 credits)**

This response is not sufficient to demonstrate even a limited understanding of the mathematical concepts in the task. Expanded forms are not correctly written as expressions. The comparison is incorrect, and the explanation is insufficient. Holistically, this response shows no overall understanding of the task.

The line plot below shows the amount of time Jamie spent working on his book report each day for four days.



What is the total amount of time, in hours, that Jamie spent working on his book report for those four days?


*Show your work.*

Answer \_\_\_\_\_ hours

# EXEMPLARY RESPONSE

41

The line plot below shows the amount of time Jamie spent working on his book report each day for four days.



What is the total amount of time, in hours, that Jamie spent working on his book report for those four days?


*Show your work.*

$$\begin{aligned} & \frac{3}{4} + 1\frac{2}{4} + 1\frac{2}{4} + 2 \\ &= \frac{3}{4} + \frac{6}{4} + \frac{6}{4} + \frac{8}{4} \\ &= \frac{23}{4} \\ &= 5\frac{3}{4} \end{aligned}$$

*OR other valid process*

Answer      $5\frac{3}{4}$      hours

The line plot below shows the amount of time Jamie spent working on his book report each day for four days.



What is the total amount of time, in hours, that Jamie spent working on his book report for those four days? [2]

*Show your work.*

$$\frac{3}{4} + 1\frac{1}{2} + 1\frac{1}{2} + 2 = 7$$

1) Add the wholes

$$2 + 2 + 1 = 4$$

2) Add the fraction

$$\frac{3}{4} + \frac{1}{2} + \frac{1}{2} = 1\frac{3}{4}$$

3) Add 4 and  $1\frac{3}{4}$

$$4 + 1\frac{3}{4} = 5\frac{3}{4}$$

Answer            $5\frac{3}{4}$            hours

### Score Credit 2 (out of 2 credits)


This response demonstrates a thorough understanding of the mathematical concepts and procedures in the task. A mathematically sound procedure of adding together the individual sums of the wholes and the fractions is used. A correct answer is provided. This response is complete and correct.



# GUIDE PAPER 2

41

The line plot below shows the amount of time Jamie spent working on his book report each day for four days.



What is the total amount of time, in hours, that Jamie spent working on his book report for those four days? [2]

Show your work.

*Cliff's 1.5 + 1.5 = 3*

*1st step  $\rightarrow \frac{1}{2} + \frac{1}{2} = 3$*

*2nd step*

*$3 + 2 = 5$*

*Final step:*

*$5 + \frac{3}{4} = 5\frac{3}{4}$*

*Answer  $5\frac{3}{4}$  hours*

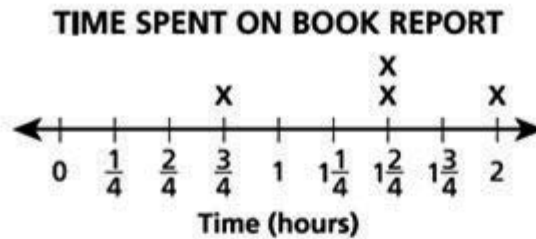
## Score Credit 2 (out of 2 credits)

This response demonstrates a thorough understanding of the mathematical concepts and procedures in the task. A mathematically sound procedure is used, and a correct answer is provided. This response is complete and correct.

# GUIDE PAPER 3

41

The line plot below shows the amount of time Jamie spent working on his book report each day for four days.



What is the total amount of time, in hours, that Jamie spent working on his book report for those four days?

*Show your work.*

$$\frac{3}{4} + (1 \frac{1}{2} + 1 \frac{1}{2}) + 2 = \frac{3}{4} + (3 + 2) = \frac{3}{4} + 5 = 5 \frac{3}{4}$$

Answer  hours

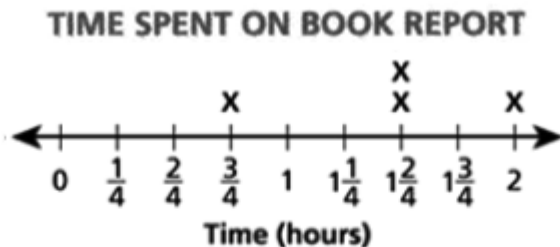
## Score Credit 2 (out of 2 credits)

This response demonstrates a thorough understanding of the mathematical concepts and procedures in the task. A mathematically sound procedure is used, and a correct answer is provided. This response is complete and correct.

# GUIDE PAPER 4

41

The line plot below shows the amount of time Jamie spent working on his book report each day for four days.



What is the total amount of time, in hours, that Jamie spent working on his book report for those four days? [2]

*Show your work.*

$$1\frac{1}{2} + 1\frac{1}{2} = 2\frac{2}{2} \text{ or } 2$$

$$\frac{3}{4} + 2 + 2 = 4\frac{3}{4}$$

Answer  $4\frac{3}{4}$  hours

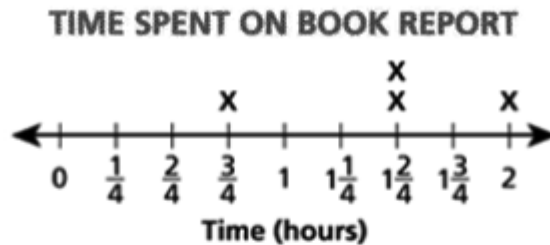
## Score Credit 1 (out of 2 credits)

This response demonstrates only a partial understanding of the mathematical concepts and procedures in the task. A mathematically appropriate process is applied; however, a calculation error ( $1\frac{1}{2} + 1\frac{1}{2} = 2\frac{2}{2}$  or 2) occurs, resulting in an incorrect solution. This response correctly addresses only some elements of the task.

# GUIDE PAPER 5

41

The line plot below shows the amount of time Jamie spent working on his book report each day for four days.



What is the total amount of time, in hours, that Jamie spent working on his book report for those four days? [2]

Show your work.

$$\frac{3}{4} + 2\frac{1}{2} + 1\frac{1}{2} + 2 = 7$$

$$2 + 2 + 2 = 4$$

$$\frac{3}{4} + \frac{1}{2} + \frac{1}{2} = \frac{5}{4}$$
$$4\frac{5}{4}$$

Answer 4 $\frac{5}{4}$  hours

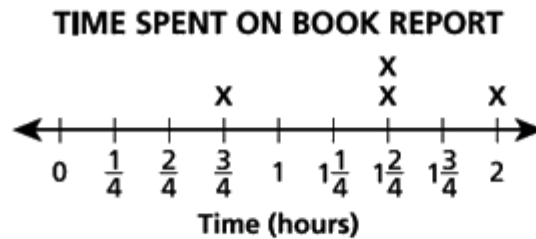
## Score Credit 1 (out of 2 credits)

This response demonstrates only a partial understanding of the mathematical concepts and procedures in the task. A mathematically sound process of adding the individual sums of the wholes and the fractions is used; however, a calculation error ( $\frac{3}{4} + \frac{1}{2} + \frac{1}{2} = \frac{5}{4}$ ) occurs, resulting in an incorrect solution. This response correctly addresses only some elements of the task.

# GUIDE PAPER 6

41

The line plot below shows the amount of time Jamie spent working on his book report each day for four days.



What is the total amount of time, in hours, that Jamie spent working on his book report for those four days?

*Show your work.*

$$\text{you do } \frac{3}{4} + 1\frac{1}{2} + 2 = 5\frac{3}{4}$$

Answer  hours

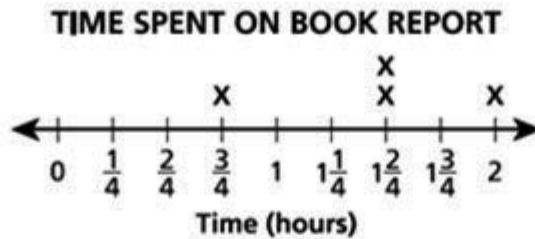
## Score Credit 1 (out of 2 credits)

This response demonstrates only a partial understanding of the mathematical concepts and procedures in the task. This response contains the correct solution; however, an incorrect equation is written, and no additional work is shown on how the solution is obtained. The required work is incomplete. This response correctly addresses only some elements of the task.

# GUIDE PAPER 7

41

The line plot below shows the amount of time Jamie spent working on his book report each day for four days.



What is the total amount of time, in hours, that Jamie spent working on his book report for those four days?

*Show your work.*

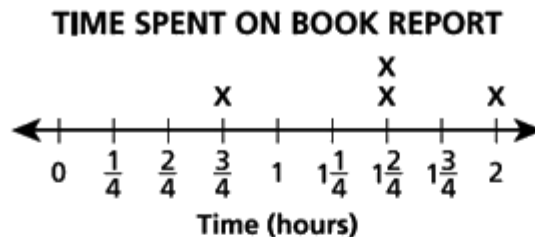
$$\begin{array}{r} + 120 \\ + 45 \\ \hline 160 \end{array} \quad \begin{array}{r} + 190 \\ + 160 \\ \hline 350 \end{array} \quad \begin{array}{r} + 350 \\ + 160 \\ \hline 490 \end{array} = 5 \text{ hours and } 45 \text{ min}$$

*Answer* 5 hours and  
45 min hours

## Score Credit 0 (out of 2 credits)

This response is not sufficient to demonstrate even a limited understanding of the mathematical concepts in the task. A correct solution is obtained using an incorrect procedure. Holistically, this response shows no overall understanding of the task.

The line plot below shows the amount of time Jamie spent working on his book report each day for four days.



What is the total amount of time, in hours, that Jamie spent working on his book report for those four days?

*Show your work.*

$$2 + 1\frac{1}{2} + \frac{3}{4} = 5\frac{1}{4}$$

Answer  $5\frac{1}{4}$  hours

**Score Credit 0 (out of 2 credits)**

This response is not sufficient to demonstrate even a limited understanding of the mathematical concepts in the task. This response is incorrect, and, holistically, is insufficient to show any understanding.

Two expressions are shown below.

Expression A:  $\frac{1}{4} \times 2$

Expression B:  $\frac{1}{2} \times 5$

Which expression, A or B, has a value greater than 1? Be sure to include the value of each expression in your answer.

*Explain how you know your answer is correct.*

---

---

---



## EXEMPLARY RESPONSE

42

Two expressions are shown below.

Expression A:  $\frac{1}{4} \times 2$

Expression B:  $\frac{1}{2} \times 5$

Which expression, A or B, has a value greater than 1? Be sure to include the value of each expression in your answer.

*Explain how you know your answer is correct.*

**For Expression A, when I solve,**

**I get the value of  $\frac{2}{4}$ , which is equivalent to  $\frac{1}{2}$  and less than 1.**

**When I solve Expression B, I get the value of  $\frac{5}{2}$ .**

**Since  $\frac{5}{2}$  is equal to  $2\frac{1}{2}$ ,**

**then Expression B is greater than 1.**

***OR***

**Expression B**

**$\frac{1}{4} + \frac{1}{4} = \frac{2}{4} = \frac{1}{2}$  and  $\frac{1}{2}$  is less than 1.**

**$\frac{1}{2} + \frac{1}{2} + \frac{1}{2} + \frac{1}{2} + \frac{1}{2} = \frac{5}{2}$ .**

**$\frac{2}{2} = 1$  so  $\frac{5}{2}$  is greater than 1.**

***OR other valid explanation***

Two expressions are shown below.

Expression A:  $\frac{1}{4} \times 2$

Expression B:  $\frac{1}{2} \times 5$

Which expression, A or B, has a value greater than 1? Be sure to include the value of each expression in your answer.

Explain how you know your answer is correct.

$\frac{1}{2} \times 5$  has a total larger than 1.  $\frac{1}{2} \times 5$  is equal to  $\frac{1}{2} + \frac{1}{2} + \frac{1}{2} + \frac{1}{2} + \frac{1}{2}$  and that equals  $2\frac{1}{2}$ . And  $\frac{1}{4} \times 2$  is equal to  $\frac{1}{4} + \frac{1}{4}$  and that equals  $\frac{2}{4}$ .  $1 < 2\frac{1}{2}$ ,  $1 > \frac{2}{4}$ .

$$\frac{1}{4} \times 2 = \frac{1}{4} + \frac{1}{4} = \frac{2}{4}$$

$$\frac{1}{2} \times 5 = \frac{1}{2} + \frac{1}{2} + \frac{1}{2} + \frac{1}{2} + \frac{1}{2} = 2\frac{1}{2}$$

$$1 < 2\frac{1}{2}$$

$$1 > \frac{2}{4}$$

### Score Credit 2 (out of 2 credits)

This response demonstrates a thorough understanding of the mathematical concepts and procedures in the task. Both expressions are correctly evaluated and compared to 1. Expression B is chosen. This response is complete and correct.

## GUIDE PAPER 2

42

Two expressions are shown below.

Expression A:  $\frac{1}{4} \times \frac{2}{1} \frac{2}{4}$

Expression B:  $\frac{1}{2} \times 5 \frac{5}{2}$

Which expression, A or B, has a value greater than 1? Be sure to include the value of each expression in your answer.

*Explain how you know your answer is correct.*

B is greater than 1 because it is an in properor fraction and it goes over one

### Score Credit 2 (out of 2 credits)

This response demonstrates a thorough understanding of the mathematical concepts and procedures in the task. Both expressions are correctly evaluated. Expression B is chosen. The explanation that B “is an in properor fraction and it goes over one” is sufficient to demonstrate understanding. This response is complete and correct.

## GUIDE PAPER 3

42

Two expressions are shown below.

Expression A:  $\frac{1}{4} \times 2$

Expression B:  $\frac{1}{2} \times 5$

Which expression, A or B, has a value greater than 1? Be sure to include the value of each expression in your answer.

*Explain how you know your answer is correct.*

$$\text{A: } \frac{1}{4} \times 2 = \frac{2}{4} \quad \text{B: } \frac{1}{2} \times 5 = \frac{5}{2} = 2\frac{1}{2}$$

Letter B is greater than 1 because it has two ones and one half. But letter A doesn't have ones it only has two fourths.

### Score Credit 2 (out of 2 credits)

This response demonstrates a thorough understanding of the mathematical concepts and procedures in the task. Both expressions are correctly evaluated and compared to 1. Expression B is chosen. This response is complete and correct.

## GUIDE PAPER 4

42

Two expressions are shown below.

Expression A:  $\frac{1}{4} \times 2$

Expression B:  $\frac{1}{2} \times 5$

Which expression, A or B, has a value greater than 1? Be sure to include the value of each expression in your answer.

*Explain how you know your answer is correct.*

$$\frac{1}{4} \times 2 = \frac{2}{4}$$

$$\frac{1}{2} \times 5 = \frac{5}{2}$$

Expression B

### Score Credit 1 (out of 2 credits)

This response demonstrates only a partial understanding of the mathematical concepts and procedures in the task. Expression B is chosen. Both expressions are correctly evaluated; however, the comparison to 1 is incomplete. This response correctly addresses only some elements of the task.

## GUIDE PAPER 5

42

Two expressions are shown below.

Expression A:  $\frac{1}{4} \times 2$

Expression B:  $\frac{1}{2} \times 5$

Which expression, A or B, has a value greater than 1? Be sure to include the value of each expression in your answer.

*Explain how you know your answer is correct.*

Expression B because  $\frac{1}{4} \times 2$  is not greater than one, while  $\frac{1}{2} \times 5$  is greater because it is a mixed number of  $2\frac{1}{2}$ .

### Score Credit 1 (out of 2 credits)

This response demonstrates only a partial understanding of the mathematical concepts and procedures in the task. Expression B is chosen; however, only B is evaluated. This response contains the correct solution, but the required work is incomplete.

## GUIDE PAPER 6

42

Two expressions are shown below.

Expression A:  $\frac{1}{4} \times 2$

Expression B:  $\frac{1}{2} \times 5$

Which expression, A or B, has a value greater than 1? Be sure to include the value of each expression in your answer.

*Explain how you know your answer is correct.*

$$\frac{1}{4} \times 2 = \frac{3}{4} \quad \frac{1}{2} \times 5 = 2 \frac{1}{2} \text{ b is greater then 1 because if you do } \frac{1}{2} \times 5$$

its  $2 \frac{1}{2}$  with it is greater then 1 beacause 2 is more then 1

### Score Credit 1 (out of 2 credits)

This response demonstrates only a partial understanding of the mathematical concepts and procedures in the task. Both expressions are evaluated; however, a calculation error ( $\frac{1}{4} \times 2 = \frac{3}{4}$ ) occurs when evaluating A. Expression B is correctly chosen based on work. This response correctly addresses only some elements of the task.

## GUIDE PAPER 7

42

Two expressions are shown below.

Expression A:  $\frac{1}{4} \times 2$

Expression B:  $\frac{1}{2} \times 5$

Which expression, A or B, has a value greater than 1? Be sure to include the value of each expression in your answer.

*Explain how you know your answer is correct.*

expression B has a greater value because  $\frac{1}{2}$  is greater than  $\frac{1}{4}$  and its  $\times 5$   
not  $\times 2$ .

### Score Credit 0 (out of 2 credits)

This response is insufficient to demonstrate even a limited understanding of the mathematical concepts in the task. A valid claim that expression B is larger in value is made; however, neither expression is evaluated or compared to 1. Holistically, this response shows no overall understanding of the task.



Two expressions are shown below.

Expression A:  $\frac{1}{4} \times 2$

Expression B:  $\frac{1}{2} \times 5$

Which expression, A or B, has a value greater than 1? Be sure to include the value of each expression in your answer.

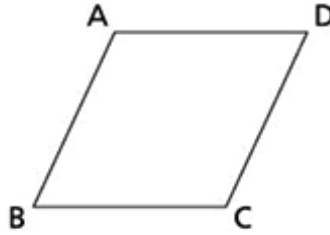
*Explain how you know your answer is correct.*

B is greater then A because if you tims it you will get 7 and for A its 6

**Score Credit 0 (out of 2 credits)**

This response is insufficient to demonstrate even a limited understanding of the mathematical concepts in the task. This response is incorrect, and, holistically, is insufficient to show any understanding.

A rhombus is shown below.



Use what you know about parallel, perpendicular, or intersecting sides to describe one pair of sides in the rhombus shown.

*Explain how you know your answer is correct.*

---

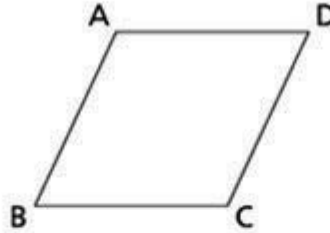
---

---

## EXEMPLARY RESPONSE

43

A rhombus is shown below.



Use what you know about parallel, perpendicular, or intersecting sides to describe one pair of sides in the rhombus shown.

*Explain how you know your answer is correct.*

**Side AD is parallel to side BC**

***OR***

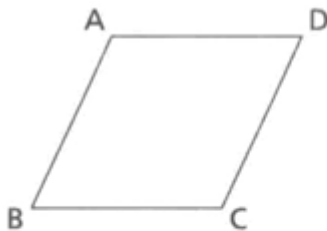
**Side AB is parallel to side DC**

***AND***

**because if the two sides are extended, the lines formed would not intersect.**

***OR other valid explanation***

A rhombus is shown below.



Use what you know about parallel, perpendicular, or intersecting sides to describe one pair of sides in the rhombus shown.

Explain how you know your answer is correct.

$\overline{AD}$  is parallel to  $\overline{BC}$  because when  
Both lines keep going they will never touch.

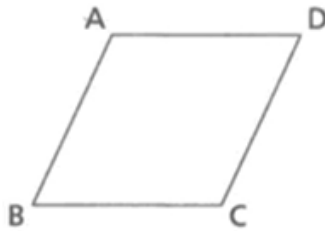
### Score Credit 2 (out of 2 credits)

This response demonstrates a thorough understanding of the mathematical concepts and procedures in the task. A pair of parallel sides is identified. The explanation that “when both lines keep going they will never touch” shows a thorough understanding. This response is complete and correct.

## GUIDE PAPER 2

43

A rhombus is shown below.



Use what you know about parallel, perpendicular, or intersecting sides to describe one pair of sides in the rhombus shown.

Explain how you know your answer is correct.

Lines AB and DC are parallel they could go on and on but never meet. Also lines AD and BC are parallel they could go on and on and never meet.

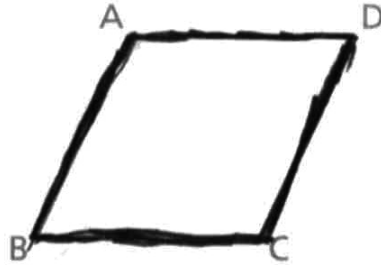
### Score Credit 2 (out of 2 credits)

This response demonstrates a thorough understanding of the mathematical concepts and procedures in the task. Both pairs of parallel sides are identified. The explanation that “they could go on and on and never meet” shows a thorough understanding. This response is complete and correct.

## GUIDE PAPER 3

43

A rhombus is shown below.



Use what you know about parallel, perpendicular, or intersecting sides to describe one pair of sides in the rhombus shown.

*Explain how you know your answer is correct.*

Parallel lines go on and on without crossing so (A to D) and (B to C)

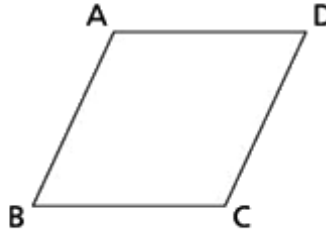
### Score Credit 2 (out of 2 credits)

This response demonstrates a thorough understanding of the mathematical concepts and procedures in the task. A pair of parallel sides is referenced (A to D and B to C), although not properly identified using segment notation. The explanation that parallel lines “go on and on without crossing” shows a thorough understanding. This response is sufficient to show a thorough understanding.

## GUIDE PAPER 4

43

A rhombus is shown below.



Use what you know about parallel, perpendicular, or intersecting sides to describe one pair of sides in the rhombus shown.

*Explain how you know your answer is correct.*

I think the rhombus shown is also a square because side A to B and side D to C are parallel.

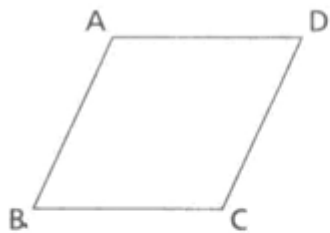
### Score Credit 1 (out of 2 credits)

This response demonstrates only a partial understanding of the mathematical concepts and procedures in the task. A pair of parallel sides is identified. However, no explanation for the parallel classification is provided. This response correctly addresses only some elements of the task.

## GUIDE PAPER 5

43

A rhombus is shown below.



Use what you know about parallel, perpendicular, or intersecting sides to describe one pair of sides in the rhombus shown.

Explain how you know your answer is correct.

This rhombus is parallel because lines A and C don't touch and lines B and D don't touch either.

### Score Credit 1 (out of 2 credits)

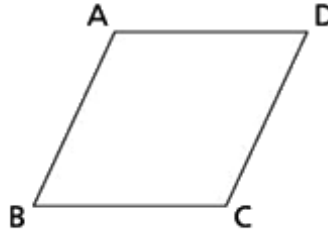
This response demonstrates only a partial understanding of the mathematical concepts and procedures in the task. Two pairs of parallel sides are referenced, although not clearly identified using line/segment notation. The explanation that they “don’t touch” is incomplete. This response correctly addresses only some elements of the task.



## GUIDE PAPER 6

43

A rhombus is shown below.



Use what you know about parallel, perpendicular, or intersecting sides to describe one pair of sides in the rhombus shown.

*Explain how you know your answer is correct.*

The type sides on the rhombus shown has 2 sets of parallel sides and 2 sets of intersecting sides.

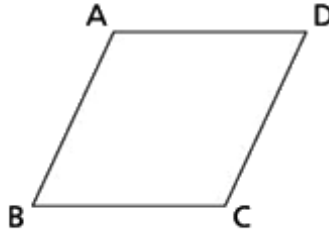
### Score Credit 1 (out of 2 credits)

This response demonstrates only a partial understanding of the mathematical concepts and procedures in the task. Correct references are made to the 2 sets of parallel sides, but states there are only 2 sets of intersecting sides (there are 4), and no sides in any of these references are identified. No further explanation of parallel or intersecting is given. The explanation is incomplete. This response correctly addresses only some elements of the task.

## GUIDE PAPER 7

43

A rhombus is shown below.



Use what you know about parallel, perpendicular, or intersecting sides to describe one pair of sides in the rhombus shown.

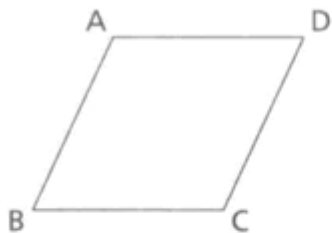
*Explain how you know your answer is correct.*

This rhombus have only one parallel side. I know this because a parallel side is both side pointing to one direction

**Score Credit 0 (out of 2 credits)**

This response is not sufficient to demonstrate even a limited understanding of the mathematical concepts in the task. This response is incorrect, and, holistically, is insufficient to show any understanding.

A rhombus is shown below.



Use what you know about parallel, perpendicular, or intersecting sides to describe one pair of sides in the rhombus shown.

*Explain how you know your answer is correct.*

*AB and DC are perpendicular,  
because they slant.*

**Score Credit 0 (out of 2 credits)**

This response is not sufficient to demonstrate even a limited understanding of the mathematical concepts in the task. This response is incorrect and shows no overall understanding.

Chairs have been set up for an event. There are 11 rows of chairs with 12 chairs in each row. When the event is over, the chairs are put away on chair racks. If each chair rack holds exactly 9 chairs, what is the **fewest** number of chair racks needed to hold all of the chairs?

*Explain how you know your answer is correct.*

---

---

---

## EXEMPLARY RESPONSE

44

Chairs have been set up for an event. There are 11 rows of chairs with 12 chairs in each row. When the event is over, the chairs are put away on chair racks. If each chair rack holds exactly 9 chairs, what is the **fewest** number of chair racks needed to hold all of the chairs?

*Explain how you know your answer is correct.*

15

11 rows of chairs with 12 chairs in each row is  $11 \times 12$ , which is equal to 132 chairs.

Each chair rack holds 9 chairs,

so 132 divided by 9 is equal to 14 with a remainder of 6.

The fewest number of chair racks needed is 15 chair racks.

*OR other valid process*

Chairs have been set up for an event. There are 11 rows of chairs with 12 chairs in each row. When the event is over, the chairs are put away on chair racks. If each chair rack holds exactly 9 chairs, what is the fewest number of chair racks needed to hold all of the chairs?

*Explain how you know your answer is correct.*

They need 15 chair racks. 6 chairs  
 will go on one of the racks.  $11 \times 12 = 132$ .  
 $132 \div 9 = 14 R 6$



### Score Credit 3 (out of 3 credits)

This response demonstrates a thorough understanding of the mathematical concepts and procedures in the task. The total number of chairs is calculated, then divided by the number of chairs per rack, and the remainder of 6 chairs is correctly interpreted. The correct answer of 15 racks is provided. This response is complete and correct.

# GUIDE PAPER 2

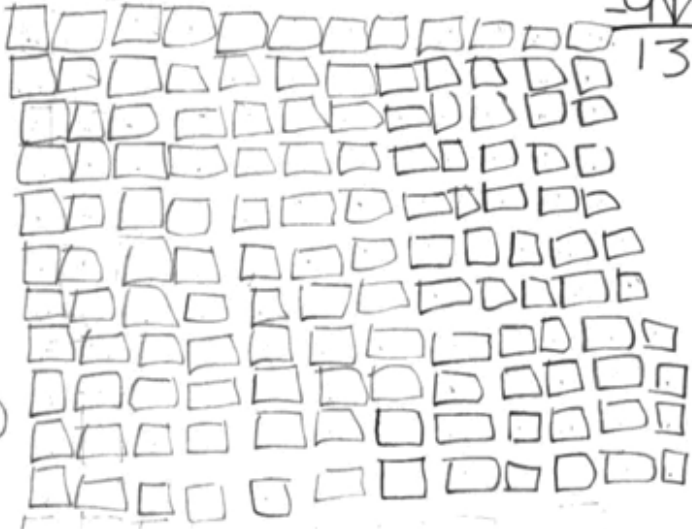
44

Chairs have been set up for an event. There are 11 rows of chairs with 12 chairs in each row. When the event is over, the chairs are put away on chair racks. If each chair rack holds exactly 9 chairs, what is the fewest number of chair racks needed to hold all of the chairs?

*Explain how you know your answer is correct.*

15 because there are not exactly 132 when you divid so you had to do 15 you couldn't stop at 14 chair racks

132 chairs



$$\begin{array}{r} 1 \\ 9 \overline{) 132} \\ \underline{-9} \phantom{2} \\ 13 \\ \underline{-13} \\ 0 \end{array}$$

1	12	120	
x 5			
60			
+ 60	x 2		
120	22		

~~1. 9, 18, 27, 36, 45, 54, 63, 72, 81, 90, 99, 108, 117, 126, 135.~~

### Score Credit 3 (out of 3 credits)

This response demonstrates a thorough understanding of the mathematical concepts and procedures in the task. The total number of chairs is counted by drawing a picture and repeat addition is used to determine the number of racks needed. The remainder is correctly interpreted with “you had to do 15 you couldn’t stop at 14 chair racks” and the correct answer is provided. This response contains sufficient work to demonstrate a thorough understanding.

## GUIDE PAPER 3

44

Chairs have been set up for an event. There are 11 rows of chairs with 12 chairs in each row. When the event is over, the chairs are put away on chair racks. If each chair rack holds exactly 9 chairs, what is the **fewest** number of chair racks needed to hold all of the chairs?

*Explain how you know your answer is correct.*

i know my awnser is correct because  $11 \times 12 = 132$  then  $132 \div 9$  chairs per rack = 14 R6 but, we can't just THROW 6 chairs away so we need 15 chair racks in all.

### Score Credit 3 (out of 3 credits)

This response demonstrates a thorough understanding of the mathematical concepts and procedures in the task. The total number of chairs is calculated, then divided by the number of chairs per rack, and the remainder of 6 chairs is correctly interpreted. The correct answer of 15 racks is provided. This response is complete and correct.



## GUIDE PAPER 4

44

Chairs have been set up for an event. There are 11 rows of chairs with 12 chairs in each row. When the event is over, the chairs are put away on chair racks. If each chair rack holds exactly 9 chairs, what is the **fewest** number of chair racks needed to hold all of the chairs?

*Explain how you know your answer is correct.*

they will need 15 chair racks. I know this is correct because  $15 \times 9 = 135$  and 135 is just 3 away from 132 so it couldn't be 14.

### Score Credit 2 (out of 3 credits)

This response demonstrates a partial understanding of the mathematical concepts and procedures in the task. Although the correct answer of 15 chair racks is determined by comparing 132 to 135, the work needed to explain why 14 chair racks would not work is incomplete. This response appropriately addresses most, but not all, aspects of the task.

# GUIDE PAPER 5

44

Chairs have been set up for an event. There are 11 rows of chairs with 12 chairs in each row. When the event is over, the chairs are put away on chair racks. If each chair rack holds exactly 9 chairs, what is the fewest number of chair racks needed to hold all of the chairs?

*Explain how you know your answer is correct.*

14 racks are the fewest number needed.  
I know because  $12 \times 11 = 124$ .  $124 \div 9 = 13R7$ .

$$\begin{array}{r} 12 \\ \times 11 \\ \hline 124 \end{array}$$
$$\begin{array}{r} 13R7 \\ 9 \overline{)124} \\ \underline{9} \phantom{0} \\ 34 \\ \underline{27} \\ 7 \end{array}$$

## Score Credit 2 (out of 3 credits)

This response demonstrates a partial understanding of the mathematical concepts and procedures in the task. A calculation error ( $12 \times 11 = 124$ ) occurs when computing the total number of chairs. The rest of the work is carried out correctly. The number of chairs is divided by the number of chairs per rack and the remainder is correctly interpreted. Based on work shown, an incorrect answer of 14 racks is provided. This response contains an incorrect solution but provides sound procedures.

# GUIDE PAPER 6

44

Chairs have been set up for an event. There are 11 rows of chairs with 12 chairs in each row. When the event is over, the chairs are put away on chair racks. If each chair rack holds exactly 9 chairs, what is the fewest number of chair racks needed to hold all of the chairs?

*Explain how you know your answer is correct.*

14 because  $14 \times 9$  equals 126 and if you do  $15 \times 9$   
it is higher than 132.

$$\begin{array}{r} 11 \\ \times 12 \\ \hline 22 \\ + 110 \\ \hline 132 \end{array}$$

$$\begin{array}{l} 9 \times 9 = 81 \\ 10 \times 9 = 90 \\ 11 \times 9 = 99 \\ 12 \times 9 = 108 \\ 13 \times 9 = 117 \\ \textcircled{14 \times 9 = 126} \\ 15 \times 9 = 135 \\ 16 \times 9 = \end{array}$$

## Score Credit 2 (out of 3 credits)

This response demonstrates a partial understanding of the mathematical concepts and procedures in the task. Multiplication of chair racks by number of chairs per rack is performed correctly. Multiples of 9 are used to determine the number of racks needed; however, the extra 6 chairs are not correctly interpreted. An incorrect response of 14 is provided. This response reflects some misunderstanding of the underlying mathematical concepts and procedures.

## GUIDE PAPER 7

44

Chairs have been set up for an event. There are 11 rows of chairs with 12 chairs in each row. When the event is over, the chairs are put away on chair racks. If each chair rack holds exactly 9 chairs, what is the fewest number of chair racks needed to hold all of the chairs?

*Explain how you know your answer is correct.*

15 chair racks.  $11 \times 12 = 132$ .  $132 \div 9 = 15r6$  so the least number of chair racks is 15

### Score Credit 1 (out of 3 credits)

This response demonstrates a limited understanding of the mathematical concepts and procedures in this task. The total number of chairs is correctly calculated; however, a calculation error ( $132 \div 9 = 15r6$ ) occurs in the division when computing the number of racks. Although a correct response of 15 chair racks is provided, the remainder is not correctly interpreted based on work provided. This response addresses some elements of the task correctly but exhibits multiple flaws related to misunderstanding of important aspects of the task.

44

Chairs have been set up for an event. There are 11 rows of chairs with 12 chairs in each row. When the event is over, the chairs are put away on chair racks. If each chair rack holds exactly 9 chairs, what is the fewest number of chair racks needed to hold all of the chairs?

*Explain how you know your answer is correct.*

14 because all the chairs together was 132 the i have to do  $132 \div 9$  and the answer is 14.

### Score Credit 1 (out of 3 credits)

This response demonstrates a limited understanding of the mathematical concepts and procedures in this task. The total number of chairs is divided by the number of chairs per rack; however, the work shown is incomplete. The remainder is not addressed in the work and an incorrect response of 14 is provided. This response correctly addresses some elements of the task but provides reasoning that is incomplete.

## GUIDE PAPER 9

44

Chairs have been set up for an event. There are 11 rows of chairs with 12 chairs in each row. When the event is over, the chairs are put away on chair racks. If each chair rack holds exactly 9 chairs, what is the fewest number of chair racks needed to hold all of the chairs?

*Explain how you know your answer is correct.*

$$12 \times 11 = 112 \quad 112 \div 9 = 11 \text{ r}3 \quad \text{they need 12 chair racks}$$

### Score Credit 1 (out of 3 credits)

This response demonstrates a limited understanding of the mathematical concepts and procedures in this task. An attempt is made to calculate the number of chairs and divide by the number of chairs per rack. The remainder obtained is correctly interpreted; however, calculation errors occur in both multiplication ( $11 \times 12 = 112$ ) and division ( $112 \div 9 = 11\text{r}3$ ). This response addresses some elements of the task, but exhibits multiple flaws related to misunderstanding of important aspects of the task.

## GUIDE PAPER 10

44

Chairs have been set up for an event. There are 11 rows of chairs with 12 chairs in each row. When the event is over, the chairs are put away on chair racks. If each chair rack holds exactly 9 chairs, what is the fewest number of chair racks needed to hold all of the chairs?

*Explain how you know your answer is correct.*

$$11 \times 12 = 112$$

$$12 \times 9 = 118$$

$$118 - 112 = 6$$

### Score Credit 0 (out of 3 credits)

This response is not sufficient to demonstrate even a limited understanding of the mathematical concepts and procedures in the task. This response is incorrect, and, holistically, is insufficient to show any understanding.

44

Chairs have been set up for an event. There are 11 rows of chairs with 12 chairs in each row. When the event is over, the chairs are put away on chair racks. If each chair rack holds exactly 9 chairs, what is the fewest number of chair racks needed to hold all of the chairs?

*Explain how you know your answer is correct.*

11 times 12 = 12 so i would take 2 racks.

**Score Credit 0 (out of 3 credits)**

This response is not sufficient to demonstrate even a limited understanding of the mathematical concepts and procedures in the task. This response is incorrect, and, holistically, is insufficient to show any understanding.











**Grade 4**

**Mathematics**

**Scoring Leader Materials**

**2024 Training Set**