

Large-Type Edition

The University of the State of New York
REGENTS HIGH SCHOOL EXAMINATION

GEOMETRY

Wednesday, January 22, 2020 — 9:15 a.m. to 12:15 p.m., only

Student Name: _____

School Name: _____

The possession or use of any communications device is strictly prohibited when taking this examination. If you have or use any communications device, no matter how briefly, your examination will be invalidated and no score will be calculated for you.

Print your name and the name of your school on the lines above.

A separate answer sheet for **Part I** has been provided to you. Follow the instructions from the proctor for completing the student information on your answer sheet.

This examination has four parts, with a total of 35 questions. You must answer all questions in this examination. Record your answers to the Part I multiple-choice questions on the separate answer sheet. Write your answers to the questions in **Parts II, III, and IV** directly in this booklet. All work should be written in pen, except for graphs and drawings, which should be done in pencil. Clearly indicate the necessary steps, including appropriate formula substitutions, diagrams, graphs, charts, etc. Utilize the information provided for each question to determine your answer. Note that diagrams are not necessarily drawn to scale.

The formulas that you may need to answer some questions in this examination are found at the end of the examination. You may remove this sheet from this booklet.

Scrap paper is not permitted for any part of this examination, but you may use the blank spaces in this booklet as scrap paper. A sheet of scrap graph paper is provided at the end of this booklet for any question for which graphing may be helpful but is not required. You may remove this sheet from this booklet. Any work done on this sheet of scrap graph paper will *not* be scored.

When you have completed the examination, you must sign the statement printed at the end of the answer sheet, indicating that you had no unlawful knowledge of the questions or answers prior to the examination and that you have neither given nor received assistance in answering any of the questions during the examination. Your answer sheet cannot be accepted if you fail to sign this declaration.

Notice...

A graphing calculator, a straightedge (ruler), and a compass must be available for you to use while taking this examination.

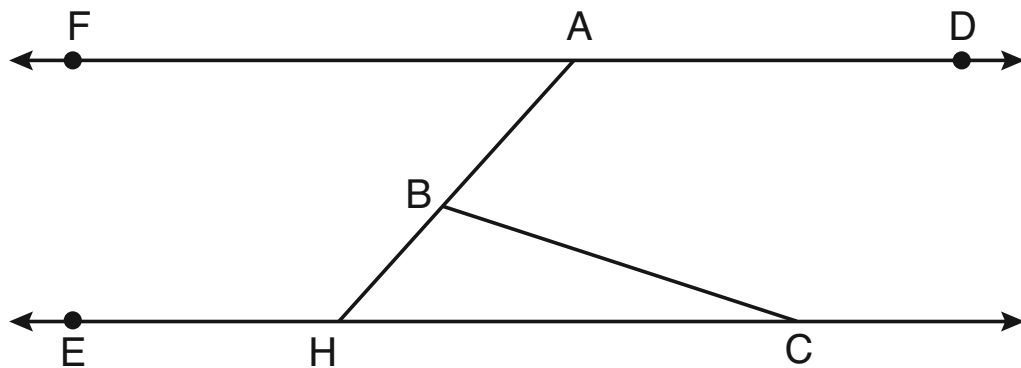
DO NOT OPEN THIS EXAMINATION BOOKLET UNTIL THE SIGNAL IS GIVEN.

Part I

Answer all 24 questions in this part. Each correct answer will receive 2 credits. No partial credit will be allowed. Utilize the information provided for each question to determine your answer. Note that diagrams are not necessarily drawn to scale. For each statement or question, choose the word or expression that, of those given, best completes the statement or answers the question. Record your answers on your separate answer sheet. [48]

Use this space for
computations.

1 In the diagram below, $\overleftrightarrow{FAD} \parallel \overleftrightarrow{EHC}$, and \overline{ABH} and \overline{BC} are drawn.



If $m\angle FAB = 48^\circ$ and $m\angle ECB = 18^\circ$, what is $m\angle ABC$?

- (1) 18° (3) 66°
(2) 48° (4) 114°

**Use this space for
computations.**

2 A cone has a volume of 108π and a base diameter of 12. What is the height of the cone?

(1) 27

(3) 3

(2) 9

(4) 4

3 Triangle JGR is similar to triangle MST . Which statement is *not* always true?

(1) $\angle J \cong \angle M$

(3) $\angle R \cong \angle T$

(2) $\angle G \cong \angle T$

(4) $\angle G \cong \angle S$

4 In parallelogram $ABCD$, diagonals \overline{AC} and \overline{BD} intersect at E . Which statement proves $ABCD$ is a rectangle?

(1) $\overline{AC} \cong \overline{BD}$

(3) $\overline{AC} \perp \overline{BD}$

(2) $\overline{AB} \perp \overline{BD}$

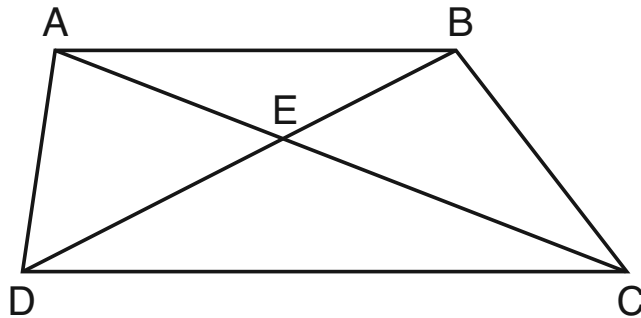
(4) \overline{AC} bisects $\angle BCD$

Use this space for computations.

5 The endpoints of directed line segment PQ have coordinates of $P(-7, -5)$ and $Q(5, 3)$. What are the coordinates of point A , on \overline{PQ} , that divide \overline{PQ} into a ratio of 1:3?

- (1) $A(-1, -1)$ (3) $A(3, 2)$
(2) $A(2, 1)$ (4) $A(-4, -3)$

6 In trapezoid $ABCD$ below, $\overline{AB} \parallel \overline{CD}$.



If $AE = 5.2$, $AC = 11.7$, and $CD = 10.5$, what is the length of \overline{AB} , to the *nearest tenth*?

- (1) 4.7 (3) 8.4
(2) 6.5 (4) 13.1

**Use this space for
computations.**

10 Jaden is comparing two cones. The radius of the base of cone A is twice as large as the radius of the base of cone B . The height of cone B is twice the height of cone A . The volume of cone A is

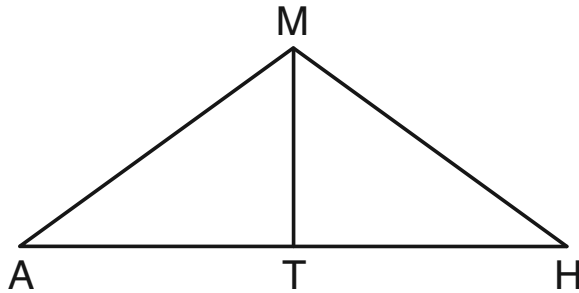
- (1) twice the volume of cone B
- (2) four times the volume of cone B
- (3) equal to the volume of cone B
- (4) equal to half the volume of cone B

11 A regular hexagon is rotated about its center. Which degree measure will carry the regular hexagon onto itself?

- (1) 45°
- (2) 90°
- (3) 120°
- (4) 135°

12 In triangle MAH below, \overline{MT} is the perpendicular bisector of \overline{AH} .

Use this space for
computations.

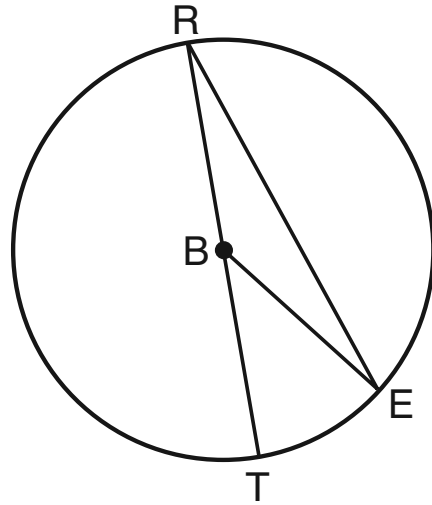


Which statement is *not* always true?

- (1) $\triangle MAH$ is isosceles.
- (2) $\triangle MAT$ is isosceles.
- (3) \overline{MT} bisects $\angle AMH$.
- (4) $\angle A$ and $\angle TMH$ are complementary.

Use this space for
computations.

13 In circle B below, diameter \overline{RT} , radius \overline{BE} , and chord \overline{RE} are drawn.



If $m\angle TRE = 15^\circ$ and $BE = 9$, then the area of sector EBR is

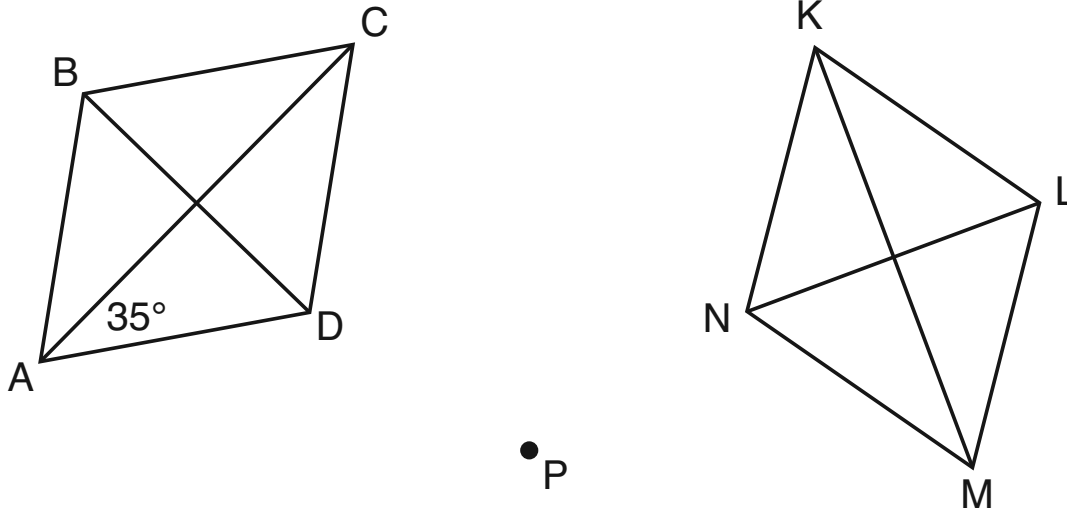
- (1) 3.375π (3) 33.75π
(2) 6.75π (4) 37.125π

14 Lou has a solid clay brick in the shape of a rectangular prism with a length of 8 inches, a width of 3.5 inches, and a height of 2.25 inches. If the clay weighs 1.055 oz/in^3 , how much does Lou's brick weigh, to the nearest ounce?

- (1) 66 (3) 63
(2) 64 (4) 60

15 Rhombus $ABCD$ can be mapped onto rhombus $KLMN$ by a rotation about point P , as shown below.

Use this space for computations.

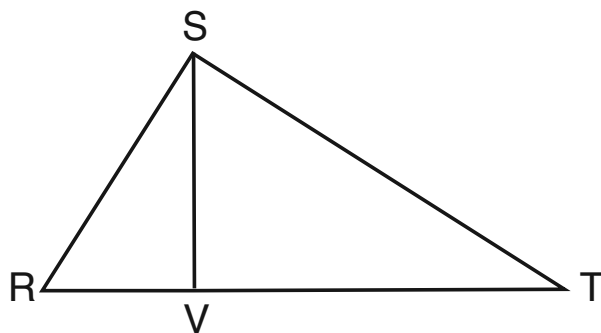


What is the measure of $\angle KNM$ if the measure of $\angle CAD = 35^\circ$?

- (1) 35°
- (2) 55°
- (3) 70°
- (4) 110°

16 In right triangle RST below, altitude \overline{SV} is drawn to hypotenuse \overline{RT} .

Use this space for
computations.



If $RV = 4.1$ and $TV = 10.2$, what is the length of \overline{ST} , to the nearest tenth?

(1) 6.5

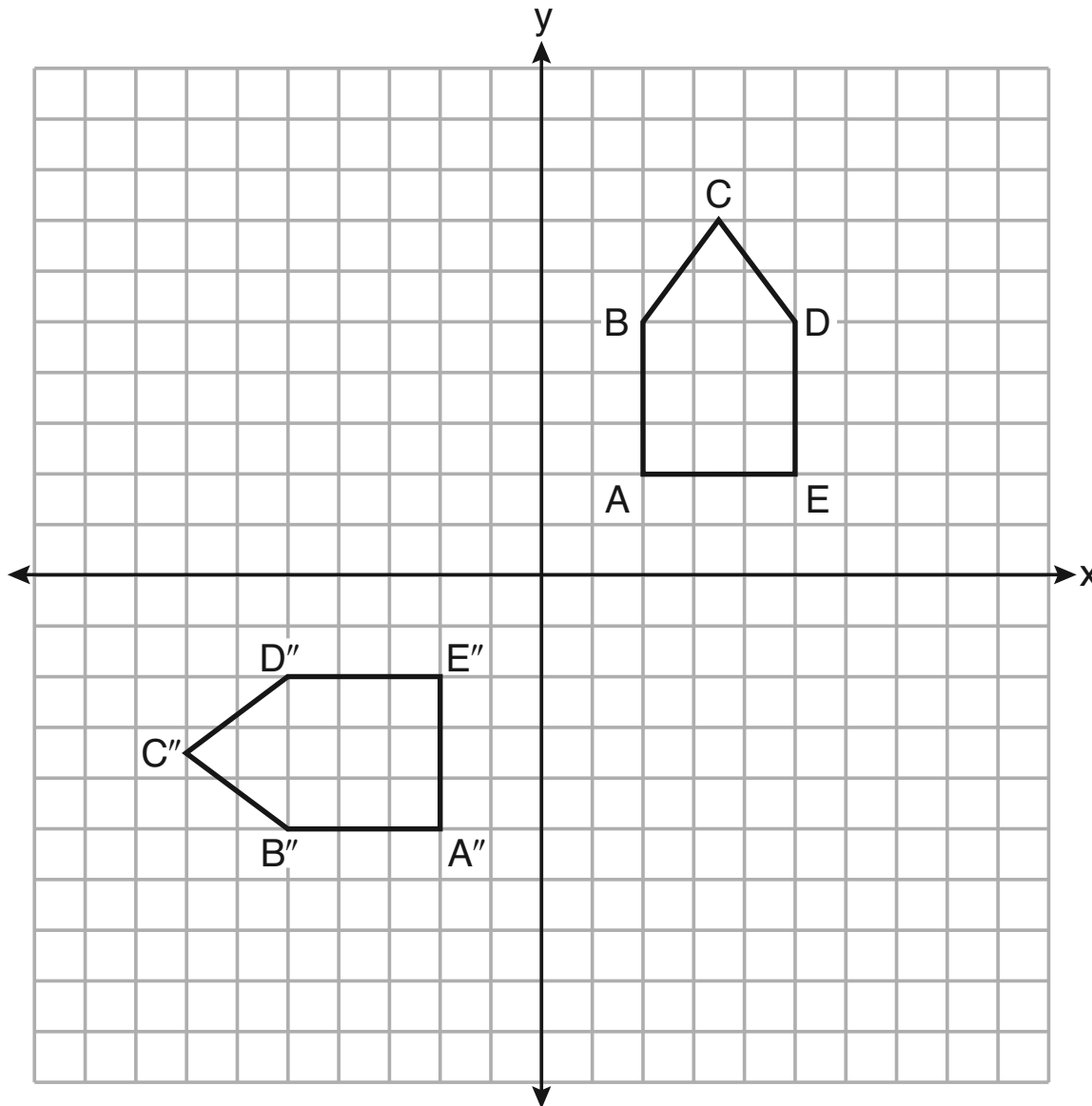
(3) 11.0

(2) 7.7

(4) 12.1

17 On the set of axes below, pentagon $ABCDE$ is congruent to $A''B''C''D''E''$.

Use this space for
computations.



Question 17 is continued on the next page.

Question 17 continued

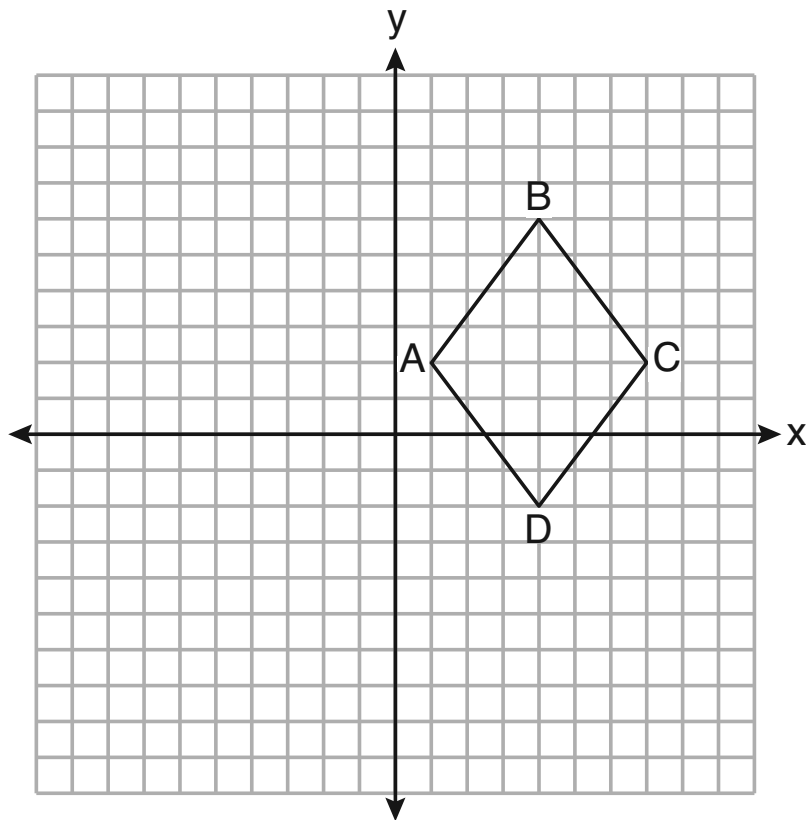
Which describes a sequence of rigid motions that maps $ABCDE$ onto $A''B''C''D''E''$?

- (1) a rotation of 90° counterclockwise about the origin followed by a reflection over the x -axis
- (2) a rotation of 90° counterclockwise about the origin followed by a translation down 7 units
- (3) a reflection over the y -axis followed by a reflection over the x -axis
- (4) a reflection over the x -axis followed by a rotation of 90° counterclockwise about the origin

GO RIGHT ON TO THE NEXT PAGE ➡

18 On the set of axes below, rhombus $ABCD$ has vertices whose coordinates are $A(1,2)$, $B(4,6)$, $C(7,2)$, and $D(4,-2)$.

Use this space for computations.



What is the area of rhombus $ABCD$?

(1) 20

(3) 25

(2) 24

(4) 48

**Use this space for
computations.**

19 Which figure(s) below can have a triangle as a two-dimensional cross section?

- I. cone
- II. cylinder
- III. cube
- IV. square pyramid

- (1) I, only
- (2) IV, only
- (3) I, II, and IV, only
- (4) I, III, and IV, only

20 What is an equation of a circle whose center is at $(2, -4)$ and is tangent to the line $x = -2$?

- (1) $(x - 2)^2 + (y + 4)^2 = 4$
- (2) $(x - 2)^2 + (y + 4)^2 = 16$
- (3) $(x + 2)^2 + (y - 4)^2 = 4$
- (4) $(x + 2)^2 + (y - 4)^2 = 16$

21 For the acute angles in a right triangle, $\sin (4x)^\circ = \cos (3x + 13)^\circ$.
What is the number of degrees in the measure of the *smaller* angle?

(1) 11°

(3) 44°

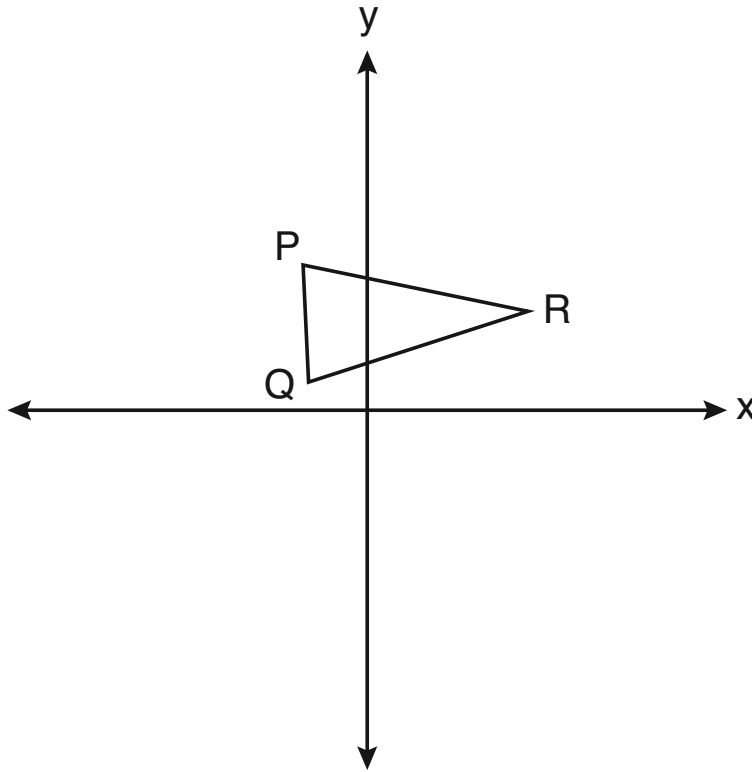
(2) 13°

(4) 52°

**Use this space for
computations.**

22 Triangle PQR is shown on the set of axes below.

Use this space for
computations.

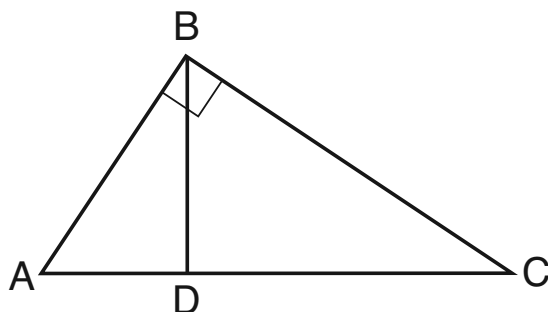


Which quadrant will contain point R'' , the image of point R , after a 90° clockwise rotation centered at $(0,0)$ followed by a reflection over the x -axis?

- (1) I
- (2) II
- (3) III
- (4) IV

23 In the diagram below of right triangle ABC , altitude \overline{BD} is drawn.

Use this space for computations.



Which ratio is always equivalent to $\cos A$?

(1) $\frac{AB}{BC}$

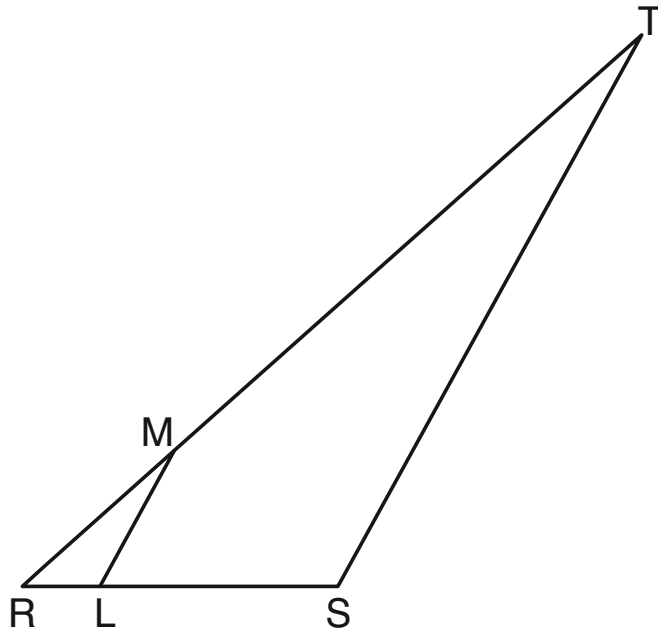
(3) $\frac{BD}{AB}$

(2) $\frac{BD}{BC}$

(4) $\frac{BC}{AC}$

Use this space for
computations.

- 24 In the diagram below of $\triangle RST$, L is a point on \overline{RS} , and M is a point on \overline{RT} , such that $\overline{LM} \parallel \overline{ST}$.



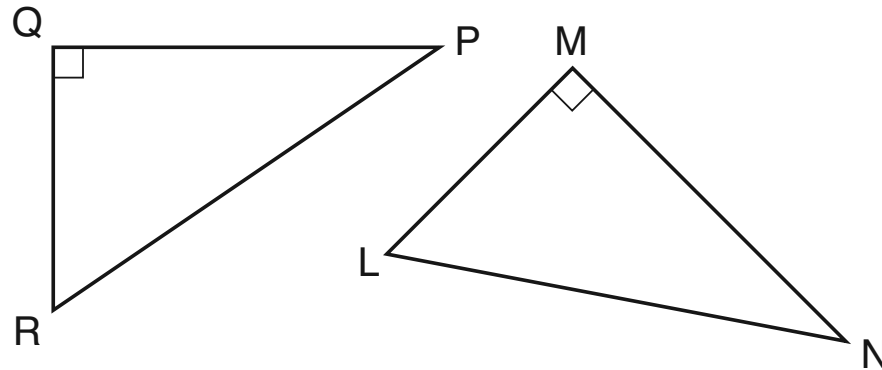
If $RL = 2$, $LS = 6$, $LM = 4$, and $ST = x + 2$, what is the length of \overline{ST} ?

- | | |
|--------|--------|
| (1) 10 | (3) 14 |
| (2) 12 | (4) 16 |
-

Part II

Answer all 7 questions in this part. Each correct answer will receive 2 credits. Clearly indicate the necessary steps, including appropriate formula substitutions, diagrams, graphs, charts, etc. Utilize the information provided for each question to determine your answer. Note that diagrams are not necessarily drawn to scale. For all questions in this part, a correct numerical answer with no work shown will receive only 1 credit. All answers should be written in pen, except for graphs and drawings, which should be done in pencil. [14]

25 In the diagram below, right triangle PQR is transformed by a sequence of rigid motions that maps it onto right triangle NML .

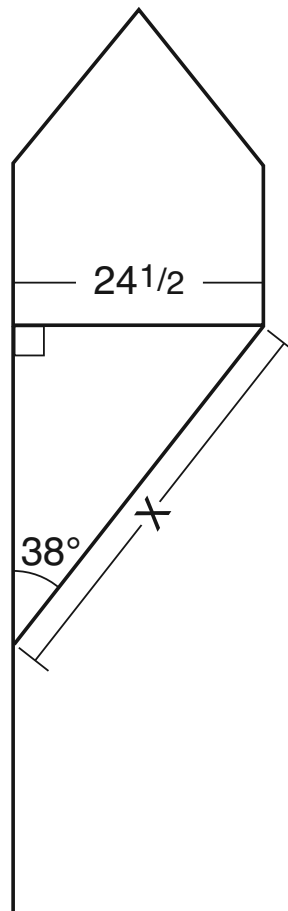


Write a set of three congruency statements that would show ASA congruency for these triangles.

Work space for question 25 is continued on the next page.

Question 25 continued

- 26** Diego needs to install a support beam to hold up his new birdhouse, as modeled below. The base of the birdhouse is $24\frac{1}{2}$ inches long. The support beam will form an angle of 38° with the vertical post. Determine and state the approximate length of the support beam, x , to the nearest inch.



Work space for question 26 is continued on the next page.

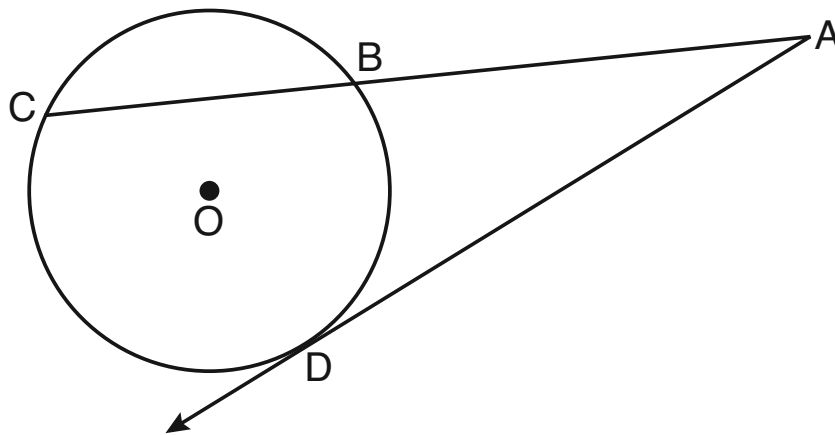
Question 26 continued

27 A rectangular tabletop will be made of maple wood that weighs 43 pounds per cubic foot. The tabletop will have a length of eight feet, a width of three feet, and a thickness of one inch. Determine and state the weight of the tabletop, in pounds.

Work space for question 27 is continued on the next page.

Question 27 continued

28 In the diagram below of circle O , secant \overline{ABC} and tangent \overline{AD} are drawn.



If $CA = 12.5$ and $CB = 4.5$, determine and state the length of \overline{DA} .


Work space for question 28 is continued on the next page.

Question 28 continued

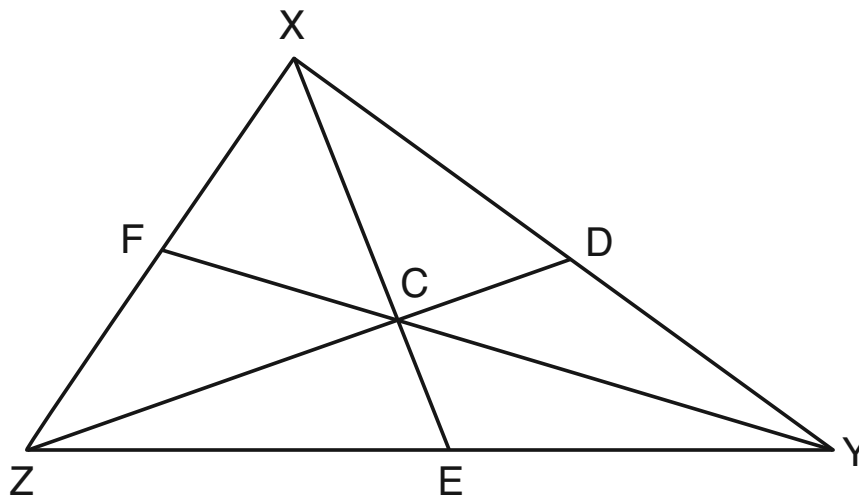
29 Given \overline{MT} on the next page, use a compass and straightedge to construct a 45° angle whose vertex is at point M .
[Leave all construction marks.]

The diagram for question 29 is on the next page.

Question 29 continued



30 In $\triangle XYZ$ shown below, medians \overline{XE} , \overline{YF} , and \overline{ZD} intersect at C .



If $CE = 5$, $YF = 21$, and $XZ = 15$, determine and state the perimeter of triangle CFX .

Work space for question 30 is continued on the next page.

Question 30 continued

31 Determine and state an equation of the line perpendicular to the line $5x - 4y = 10$ and passing through the point $(5,12)$.

Work space for question 31 is continued on the next page.

Question 31 continued

Part III

Answer all 3 questions in this part. Each correct answer will receive 4 credits. Clearly indicate the necessary steps, including appropriate formula substitutions, diagrams, graphs, charts, etc. Utilize the information provided for each question to determine your answer. Note that diagrams are not necessarily drawn to scale. For all questions in this part, a correct numerical answer with no work shown will receive only 1 credit. All answers should be written in pen, except for graphs and drawings, which should be done in pencil. [12]

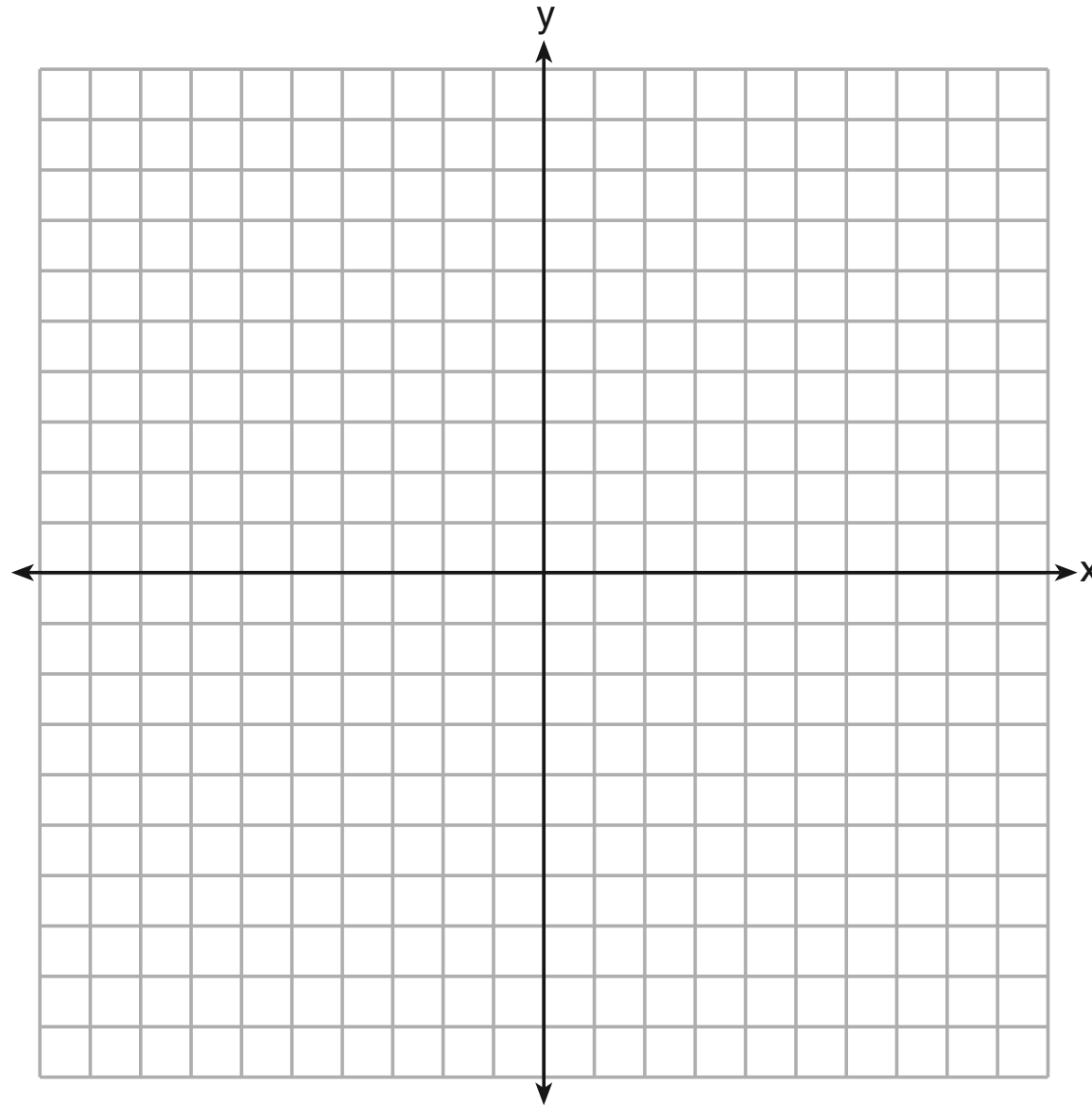
32 Quadrilateral *NATS* has coordinates $N(-4, -3)$, $A(1, 2)$, $T(8, 1)$, and $S(3, -4)$.

Prove quadrilateral *NATS* is a rhombus.

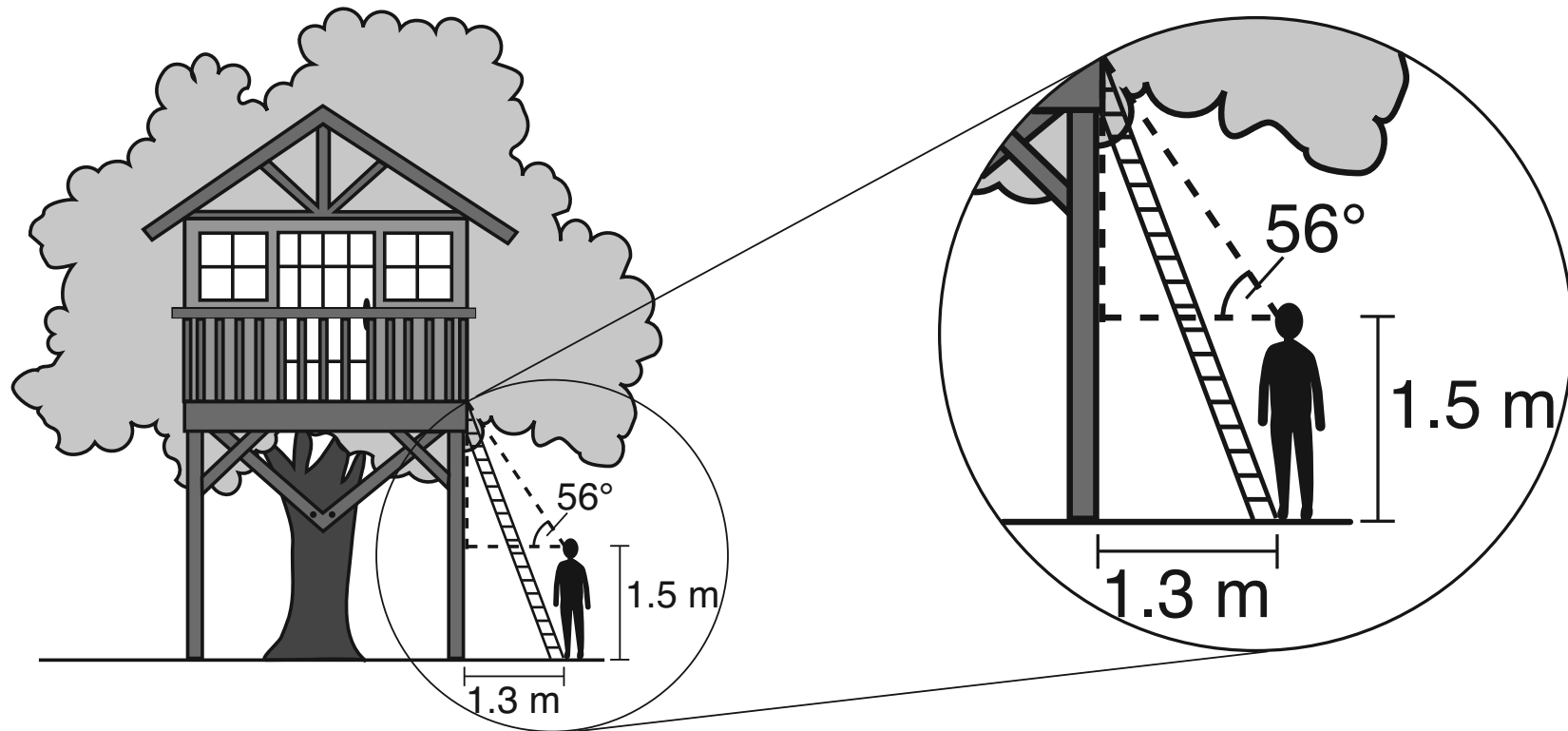
[The use of the set of axes on page 37 is optional.]

The set of axes for question 32 is on the next page.

Question 32 continued



- 33** David has just finished building his treehouse and still needs to buy a ladder to be attached to the ledge of the treehouse and anchored at a point on the ground, as modeled below. David is standing 1.3 meters from the stilt supporting the treehouse. This is the point on the ground where he has decided to anchor the ladder. The angle of elevation from his eye level to the bottom of the treehouse is 56 degrees. David's eye level is 1.5 meters above the ground.

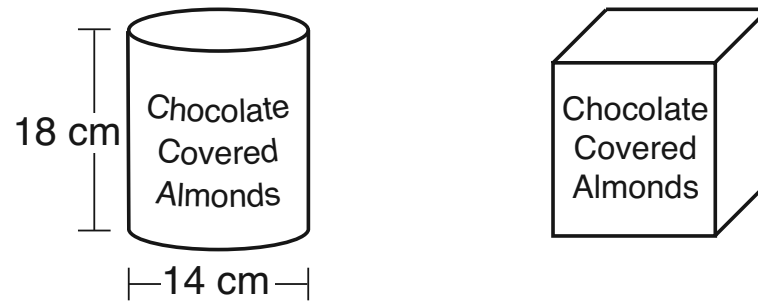


Determine and state the minimum length of a ladder, to the *nearest tenth of a meter*, that David will need to buy for his treehouse.

Work space for question 33 is continued on the next page.

Question 33 continued

- 34** A manufacturer is designing a new container for their chocolate-covered almonds. Their original container was a cylinder with a height of 18 cm and a diameter of 14 cm. The new container can be modeled by a rectangular prism with a square base and will contain the same amount of chocolate-covered almonds.



If the new container's height is 16 cm, determine and state, to the *nearest tenth of a centimeter*, the side length of the new container if both containers contain the same amount of almonds.

Question 34 is continued on the next page.

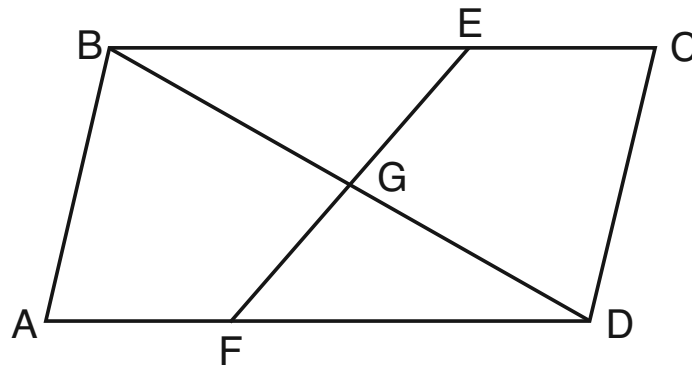
Question 34 continued

A store owner who sells the chocolate-covered almonds displays them on a shelf whose dimensions are 80 cm long and 60 cm wide. The shelf can only hold one layer of new containers when each new container sits on its square base. Determine and state the maximum number of new containers the store owner can fit on the shelf.

Part IV

Answer the question in this part. A correct answer will receive 6 credits. Clearly indicate the necessary steps, including appropriate formula substitutions, diagrams, graphs, charts, etc. Utilize the information provided for the question to determine your answer. Note that diagrams are not necessarily drawn to scale. For the question in this part, a correct numerical answer with no work shown will receive only 1 credit. All answers should be written in pen, except for graphs and drawings, which should be done in pencil. [6]

- 35 In quadrilateral $ABCD$, E and F are points on \overline{BC} and \overline{AD} , respectively, and \overline{BGD} and \overline{EGF} are drawn such that $\angle ABG \cong \angle CDG$, $\overline{AB} \cong \overline{CD}$, and $\overline{CE} \cong \overline{AF}$.




Prove: $\overline{FG} \cong \overline{EG}$


Work space for question 35 is continued on the next page.

Question 35 continued

Scrap Graph Paper — This sheet will *not* be scored.



Scrap Graph Paper — This sheet will *not* be scored.



High School Math Reference Sheet

1 inch = 2.54 centimeters	1 kilometer = 0.62 mile	1 cup = 8 fluid ounces
1 meter = 39.37 inches	1 pound = 16 ounces	1 pint = 2 cups
1 mile = 5280 feet	1 pound = 0.454 kilogram	1 quart = 2 pints
1 mile = 1760 yards	1 kilogram = 2.2 pounds	1 gallon = 4 quarts
1 mile = 1.609 kilometers	1 ton = 2000 pounds	1 gallon = 3.785 liters
		1 liter = 0.264 gallon
		1 liter = 1000 cubic centimeters

Triangle	$A = \frac{1}{2}bh$
Parallelogram	$A = bh$
Circle	$A = \pi r^2$
Circle	$C = \pi d$ or $C = 2\pi r$
General Prisms	$V = Bh$

Pythagorean Theorem	$a^2 + b^2 = c^2$
Quadratic Formula	$x = \frac{-b \pm \sqrt{b^2 - 4ac}}{2a}$
Arithmetic Sequence	$a_n = a_1 + (n - 1)d$
Geometric Sequence	$a_n = a_1 r^{n - 1}$
Geometric Series	$S_n = \frac{a_1 - a_1 r^n}{1 - r}$ where $r \neq 1$

The Reference Sheet is continued on the next page.

Reference Sheet — concluded

Cylinder	$V = \pi r^2 h$
Sphere	$V = \frac{4}{3} \pi r^3$
Cone	$V = \frac{1}{3} \pi r^2 h$
Pyramid	$V = \frac{1}{3} B h$

Radians	1 radian = $\frac{180}{\pi}$ degrees
Degrees	1 degree = $\frac{\pi}{180}$ radians
Exponential Growth/Decay	$A = A_0 e^{k(t - t_0)} + B_0$